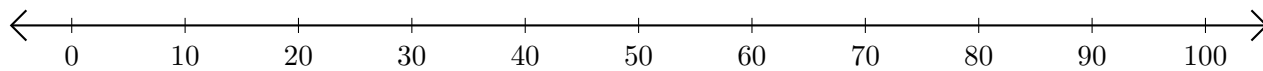


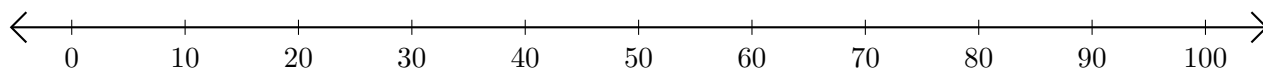
Addition de Nombres sur une Droite Graduée (A)

Utilisez la droite graduée pour calculer chaque somme.

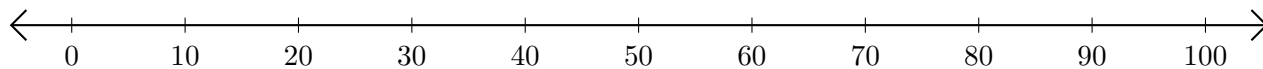
1. $80 + 20 = \underline{\quad}$



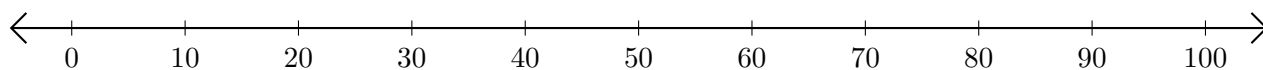
2. $50 + 10 = \underline{\quad}$



3. $70 + 20 = \underline{\quad}$



4. $20 + 60 = \underline{\quad}$



5. $40 + 40 = \underline{\quad}$

