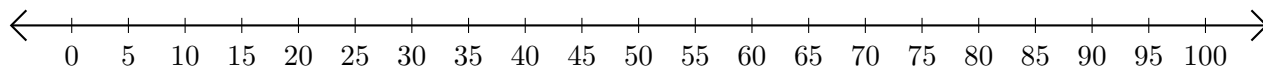


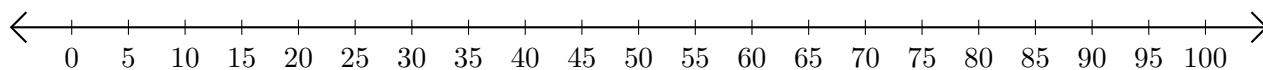
Addition de Nombres sur une Droite Graduée (E)

Utilisez la droite graduée pour calculer chaque somme.

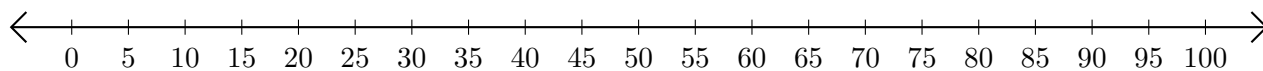
1. $20 + 20 = \underline{\quad}$



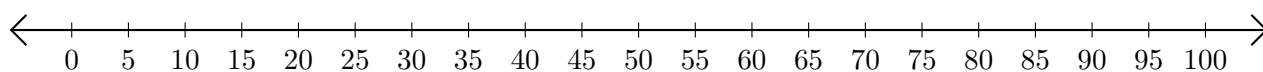
2. $70 + 30 = \underline{\quad}$



3. $25 + 35 = \underline{\quad}$



4. $10 + 55 = \underline{\quad}$



5. $50 + 25 = \underline{\quad}$

