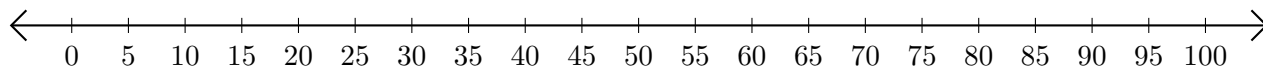


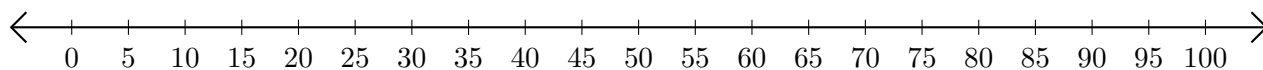
Addition de Nombres sur une Droite Graduée (C)

Utilisez la droite graduée pour calculer chaque somme.

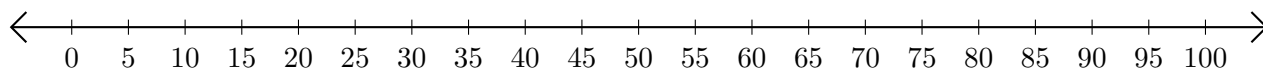
1. $55 + 25 = \underline{\quad}$



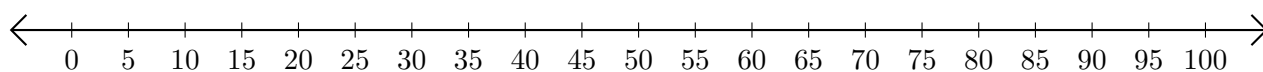
2. $85 + 10 = \underline{\quad}$



3. $90 + 5 = \underline{\quad}$



4. $40 + 30 = \underline{\quad}$



5. $20 + 20 = \underline{\quad}$

