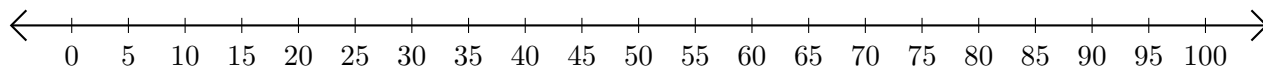


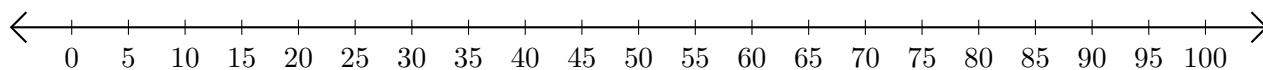
Addition de Nombres sur une Droite Graduée (A)

Utilisez la droite graduée pour calculer chaque somme.

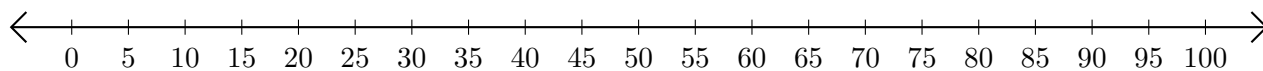
1. $70 + 10 = \underline{\hspace{2cm}}$



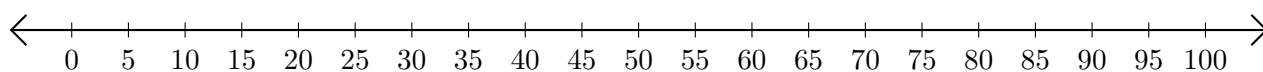
2. $30 + 45 = \underline{\hspace{2cm}}$



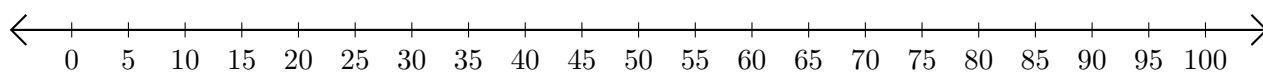
3. $50 + 45 = \underline{\hspace{2cm}}$



4. $90 + 10 = \underline{\hspace{2cm}}$



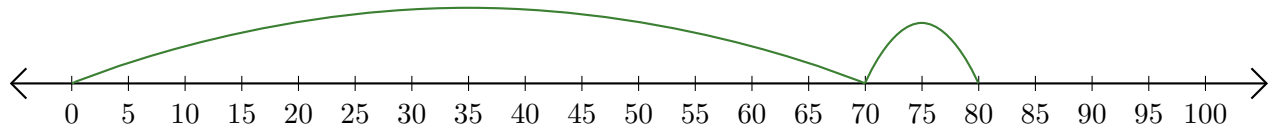
5. $55 + 45 = \underline{\hspace{2cm}}$



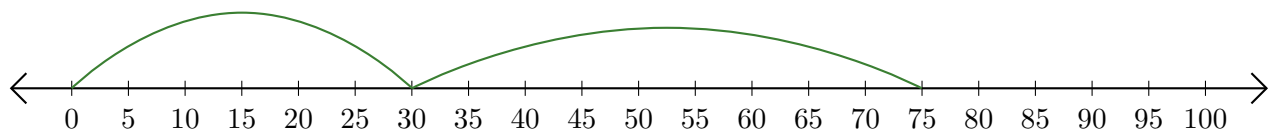
Addition de Nombres sur une Droite Graduée (A) Réponses

Utilisez la droite graduée pour calculer chaque somme.

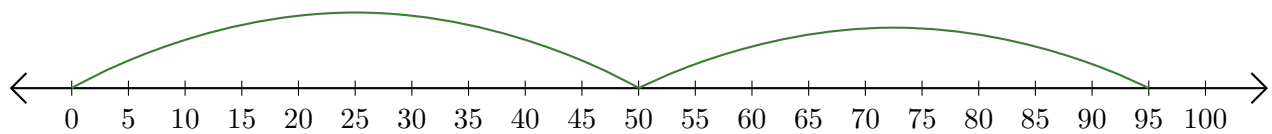
1. $70 + 10 = \underline{80}$



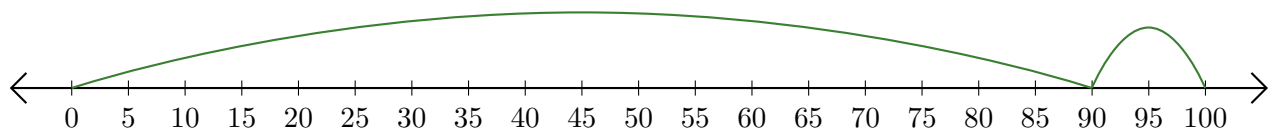
2. $30 + 45 = \underline{75}$



3. $50 + 45 = \underline{95}$



4. $90 + 10 = \underline{100}$



5. $55 + 45 = \underline{100}$

