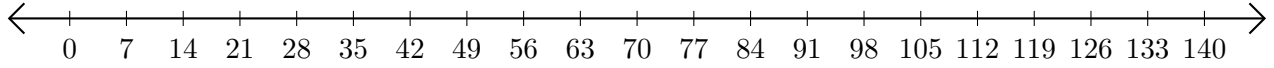


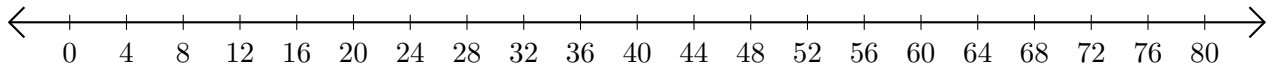
Opérations sur Une Droite Graduée (J)

Utilisez la droite graduée pour calculer chaque somme ou différence.

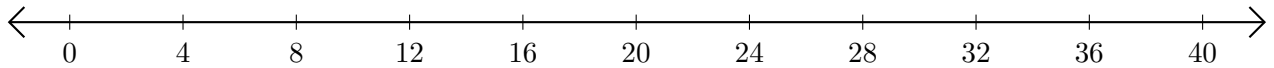
1. $14 + 21 = \underline{\hspace{2cm}}$



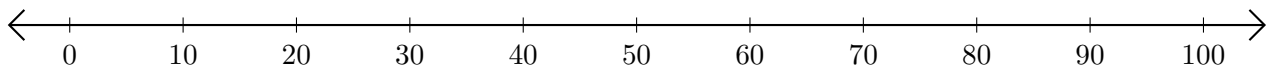
2. $76 - 52 = \underline{\hspace{2cm}}$



3. $32 + 4 = \underline{\hspace{2cm}}$



4. $100 - 90 = \underline{\hspace{2cm}}$



5. $49 + 21 = \underline{\hspace{2cm}}$

