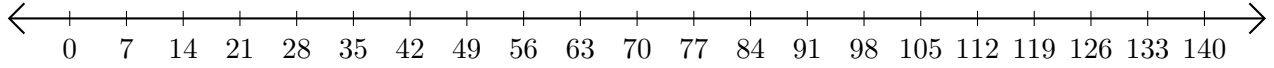


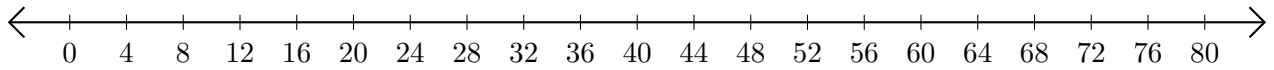
Opérations sur Une Droite Graduée (J)

Utilisez la droite graduée pour calculer chaque somme ou différence.

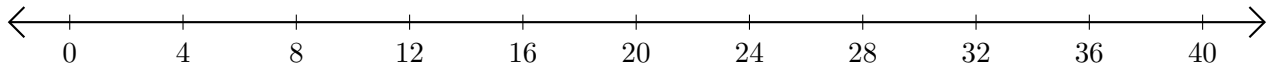
1. $14 + 21 = \underline{\hspace{2cm}}$



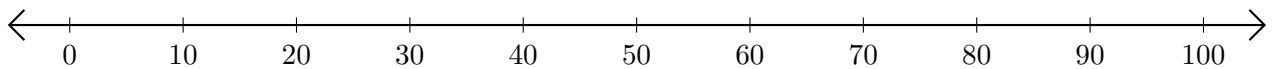
2. $76 - 52 = \underline{\hspace{2cm}}$



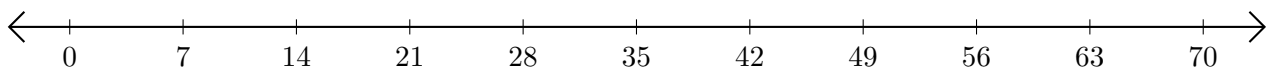
3. $32 + 4 = \underline{\hspace{2cm}}$



4. $100 - 90 = \underline{\hspace{2cm}}$



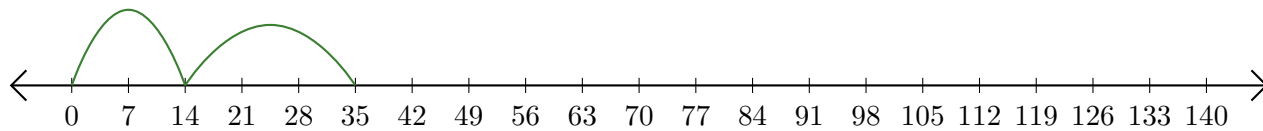
5. $49 + 21 = \underline{\hspace{2cm}}$



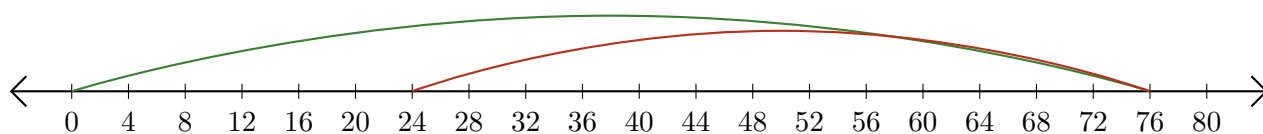
Opérations sur Une Droite Graduée (J) Réponses

Utilisez la droite graduée pour calculer chaque somme ou différence.

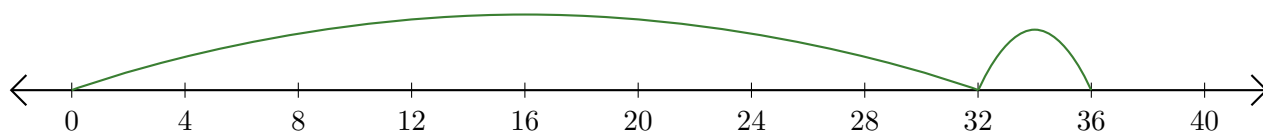
1. $14 + 21 = \underline{35}$



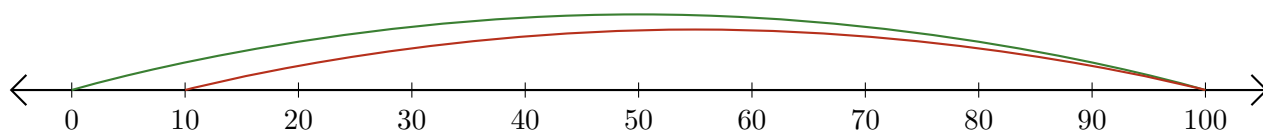
2. $76 - 52 = \underline{24}$



3. $32 + 4 = \underline{36}$



4. $100 - 90 = \underline{10}$



5. $49 + 21 = \underline{70}$

