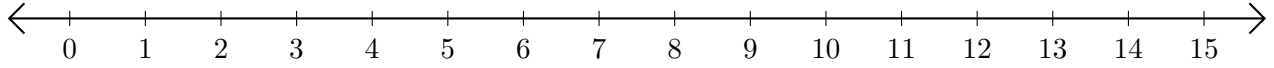


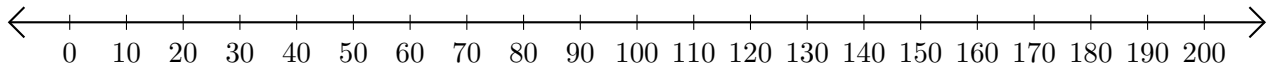
Opérations sur Une Droite Graduée (I)

Utilisez la droite graduée pour calculer chaque somme ou différence.

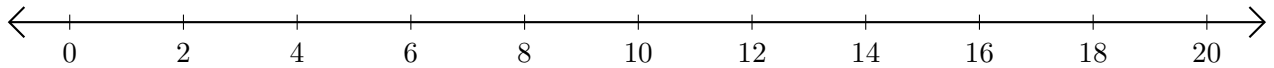
1. $1 + 4 = \underline{\quad}$



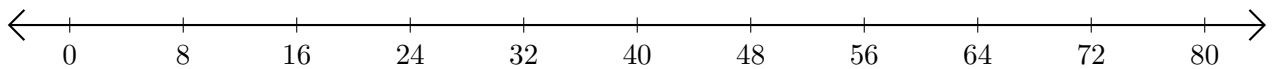
2. $200 - 130 = \underline{\quad}$



3. $18 + 2 = \underline{\quad}$



4. $56 - 40 = \underline{\quad}$



5. $15 - 5 = \underline{\quad}$

