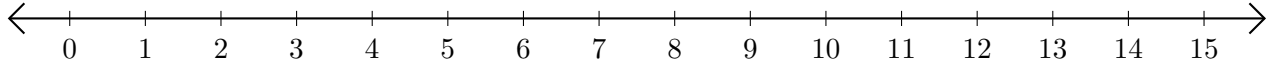


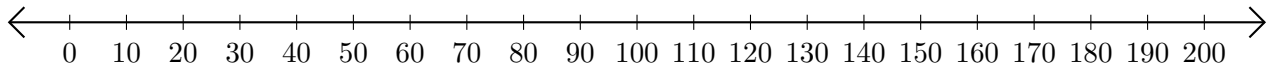
Opérations sur Une Droite Graduée (I)

Utilisez la droite graduée pour calculer chaque somme ou différence.

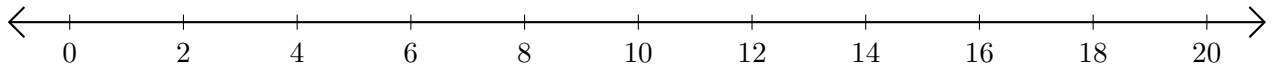
1. $1 + 4 = \underline{\quad}$



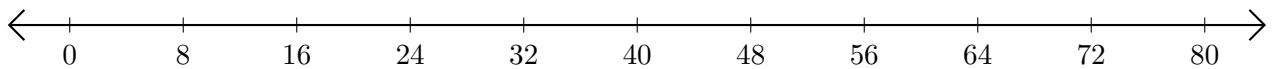
2. $200 - 130 = \underline{\quad}$



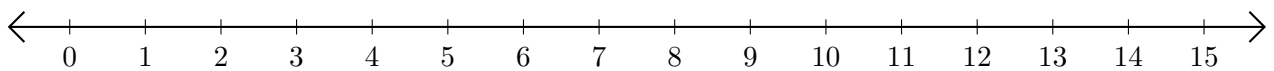
3. $18 + 2 = \underline{\quad}$



4. $56 - 40 = \underline{\quad}$



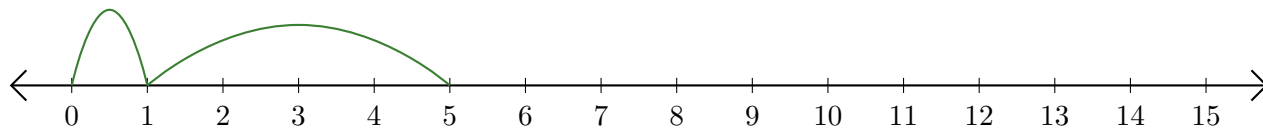
5. $15 - 5 = \underline{\quad}$



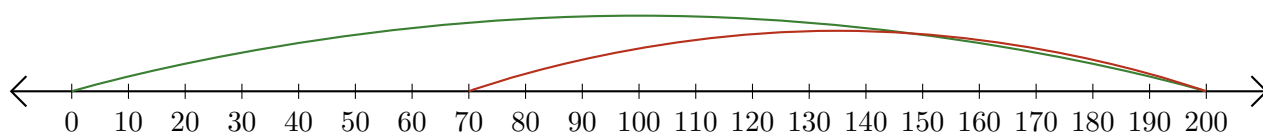
Opérations sur Une Droite Graduée (I) Réponses

Utilisez la droite graduée pour calculer chaque somme ou différence.

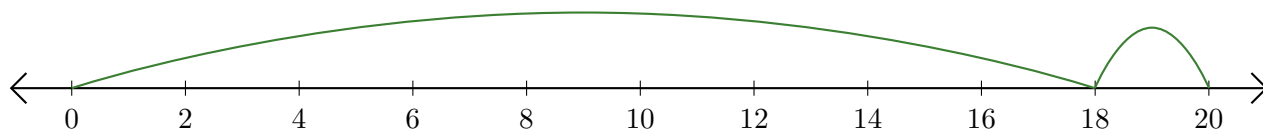
1. $1 + 4 = \underline{5}$



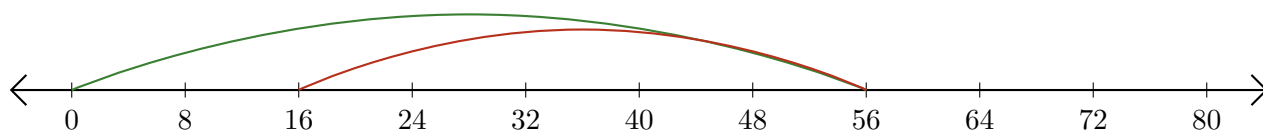
2. $200 - 130 = \underline{70}$



3. $18 + 2 = \underline{20}$



4. $56 - 40 = \underline{16}$



5. $15 - 5 = \underline{10}$

