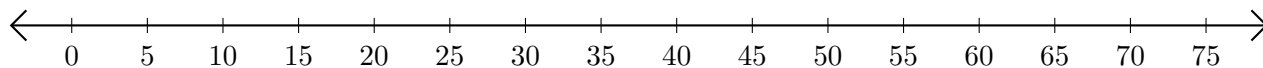


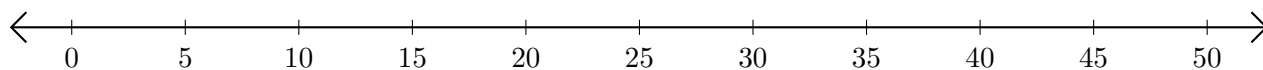
Opérations sur Une Droite Graduée (E)

Utilisez la droite graduée pour calculer chaque somme ou différence.

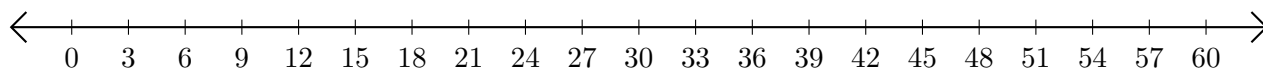
1. $60 + 5 = \underline{\quad}$



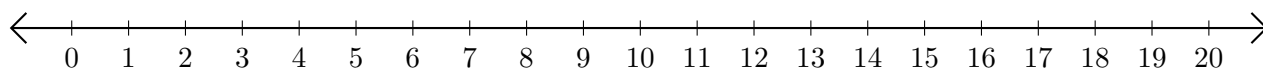
2. $35 - 20 = \underline{\quad}$



3. $18 + 36 = \underline{\quad}$



4. $17 - 16 = \underline{\quad}$



5. $8 - 2 = \underline{\quad}$

