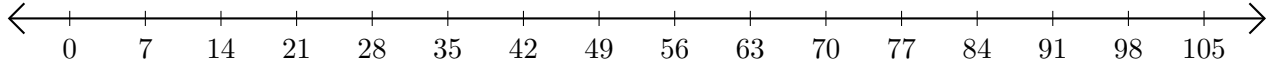


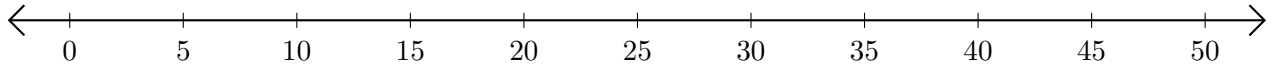
# Opérations sur Une Droite Graduée (D)

Utilisez la droite graduée pour calculer chaque somme ou différence.

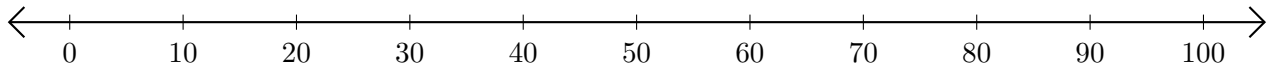
1.  $49 + 21 = \underline{\quad}$



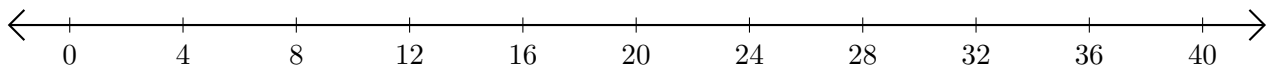
2.  $20 - 15 = \underline{\quad}$



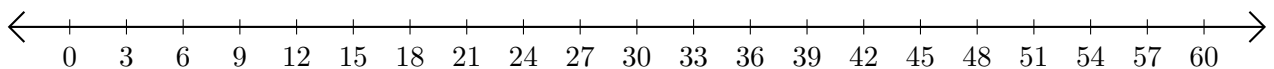
3.  $20 + 20 = \underline{\quad}$



4.  $16 - 4 = \underline{\quad}$



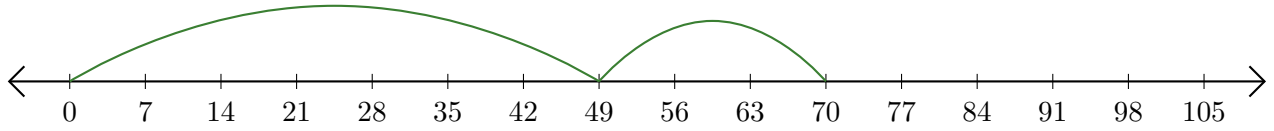
5.  $60 - 57 = \underline{\quad}$



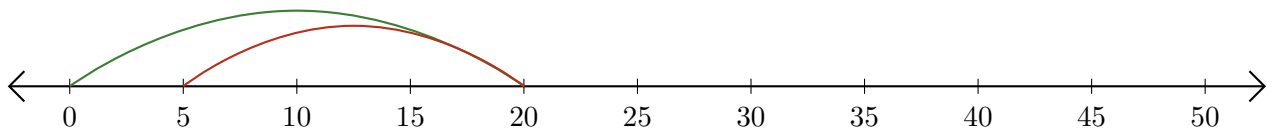
# Opérations sur Une Droite Graduée (D) Réponses

Utilisez la droite graduée pour calculer chaque somme ou différence.

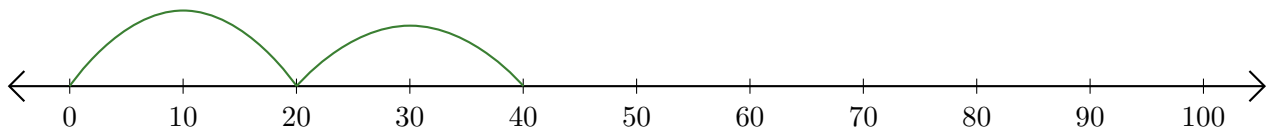
1.  $49 + 21 = \underline{70}$



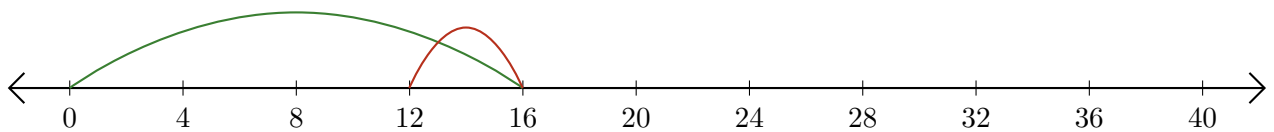
2.  $20 - 15 = \underline{5}$



3.  $20 + 20 = \underline{40}$



4.  $16 - 4 = \underline{12}$



5.  $60 - 57 = \underline{3}$

