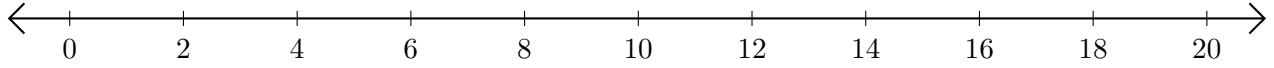


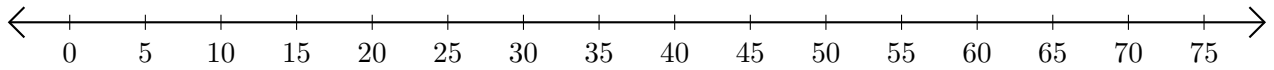
Opérations sur Une Droite Graduée (C)

Utilisez la droite graduée pour calculer chaque somme ou différence.

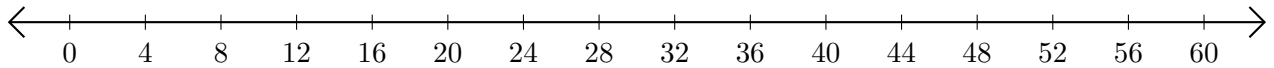
1. $10 + 8 = \underline{\quad}$



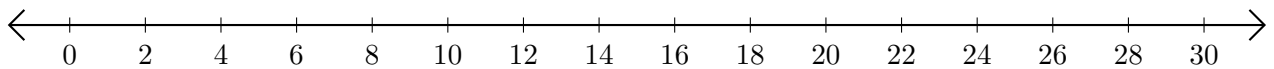
2. $55 - 15 = \underline{\quad}$



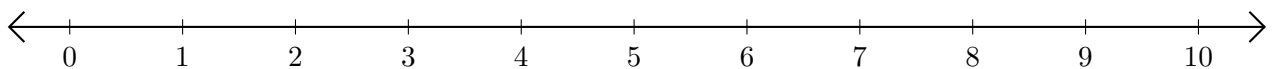
3. $48 + 8 = \underline{\quad}$



4. $12 - 2 = \underline{\quad}$



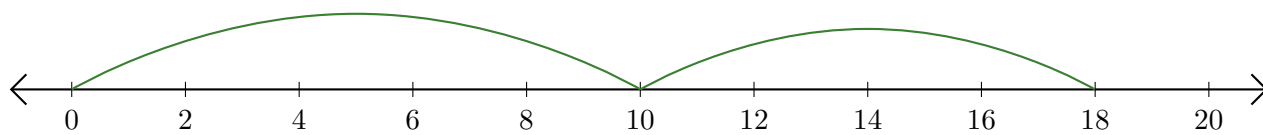
5. $3 - 2 = \underline{\quad}$



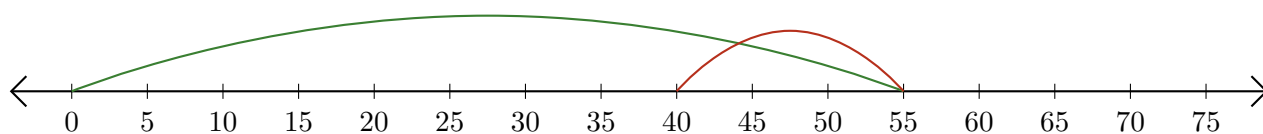
Opérations sur Une Droite Graduée (C) Réponses

Utilisez la droite graduée pour calculer chaque somme ou différence.

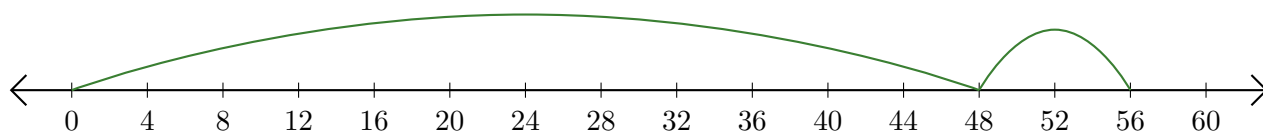
1. $10 + 8 = \underline{18}$




2. $55 - 15 = \underline{40}$



3. $48 + 8 = \underline{56}$



4. $12 - 2 = \underline{10}$



5. $3 - 2 = \underline{1}$

