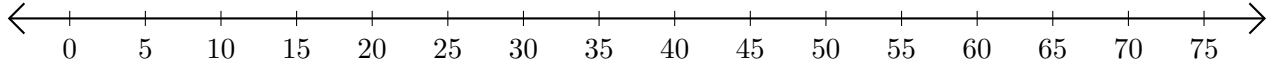


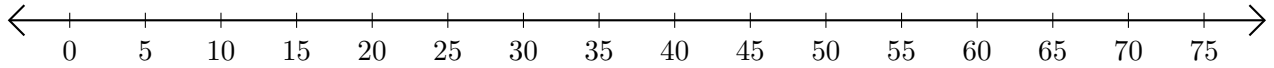
# Opérations sur Une Droite Graduée (A)

Utilisez la droite graduée pour calculer chaque somme ou différence.

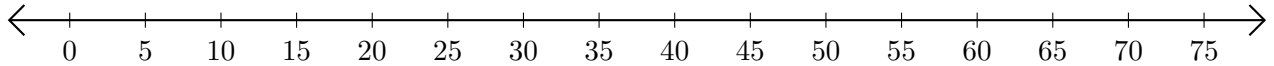
1.  $55 + 10 = \underline{\hspace{2cm}}$



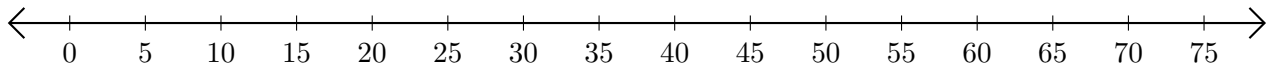
2.  $35 - 10 = \underline{\hspace{2cm}}$



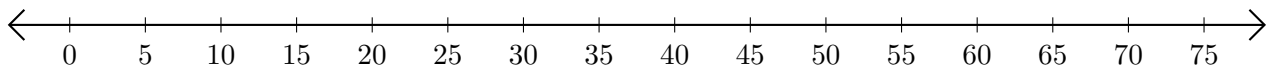
3.  $15 + 25 = \underline{\hspace{2cm}}$



4.  $55 - 45 = \underline{\hspace{2cm}}$



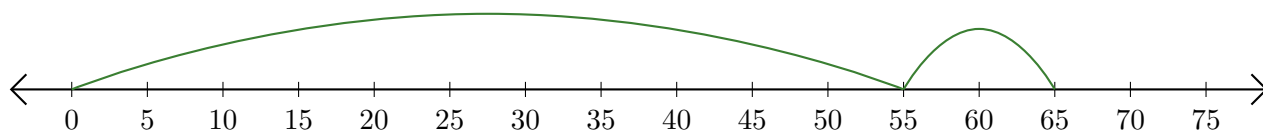
5.  $60 + 5 = \underline{\hspace{2cm}}$



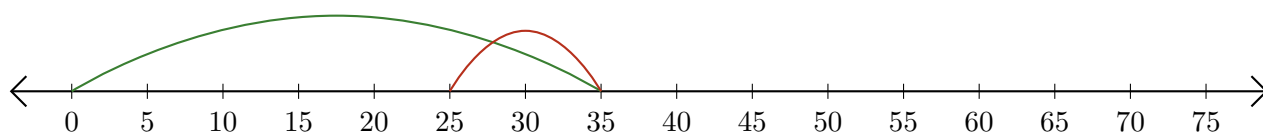
# Opérations sur Une Droite Graduée (A) Réponses

Utilisez la droite graduée pour calculer chaque somme ou différence.

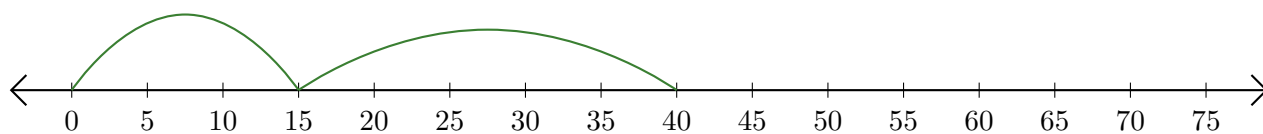
1.  $55 + 10 = \underline{65}$



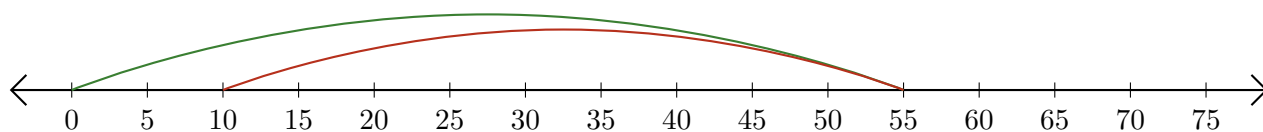
2.  $35 - 10 = \underline{25}$



3.  $15 + 25 = \underline{40}$



4.  $55 - 45 = \underline{10}$



5.  $60 + 5 = \underline{65}$

