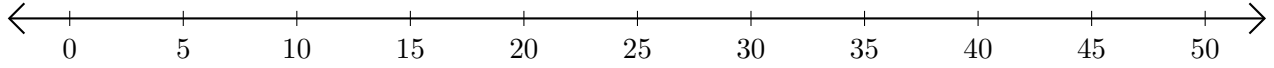


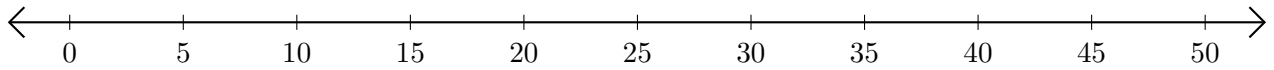
# Opérations sur Une Droite Graduée (I)

Utilisez la droite graduée pour calculer chaque somme ou différence.

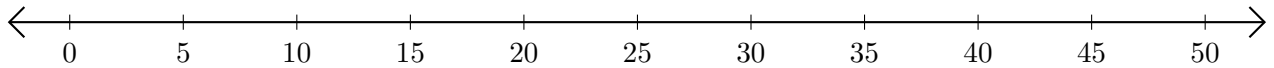
1.  $45 + 5 = \underline{\quad}$



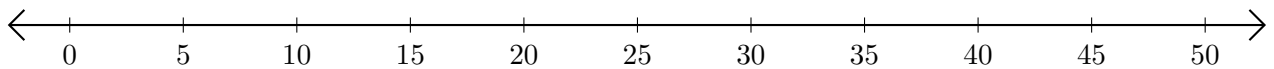
2.  $50 - 30 = \underline{\quad}$



3.  $5 + 5 = \underline{\quad}$



4.  $30 - 20 = \underline{\quad}$



5.  $50 - 35 = \underline{\quad}$

