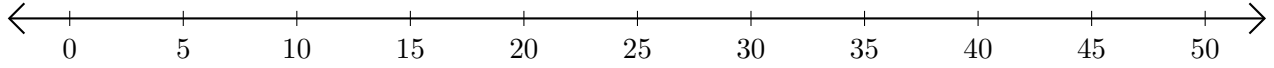


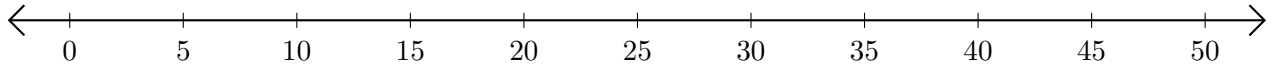
# Opérations sur Une Droite Graduée (H)

Utilisez la droite graduée pour calculer chaque somme ou différence.

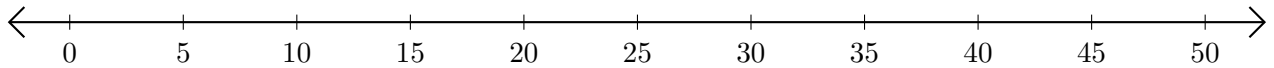
1.  $35 + 10 = \underline{\quad}$



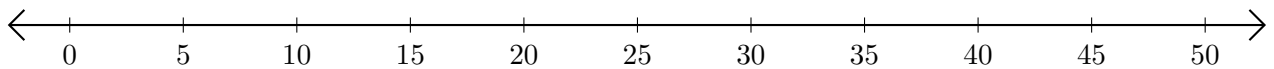
2.  $45 - 40 = \underline{\quad}$



3.  $30 + 5 = \underline{\quad}$



4.  $45 - 15 = \underline{\quad}$



5.  $10 - 5 = \underline{\quad}$

