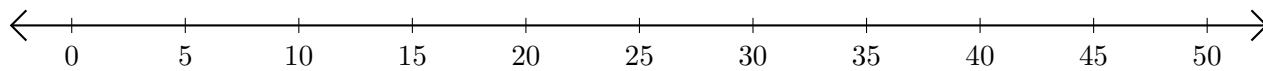


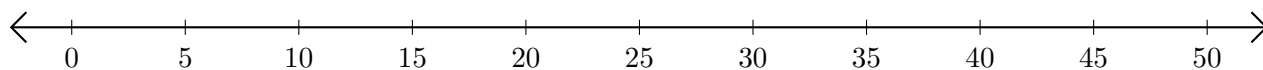
## Opérations sur Une Droite Graduée (B)

Utilisez la droite graduée pour calculer chaque somme ou différence.

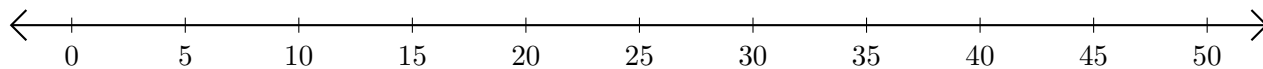
1.  $15 + 20 = \underline{\quad}$



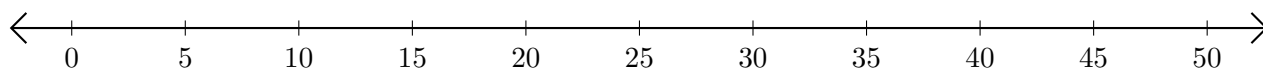
2.  $45 - 35 = \underline{\quad}$



3.  $10 + 10 = \underline{\quad}$



4.  $50 - 45 = \underline{\quad}$



5.  $50 - 30 = \underline{\quad}$

