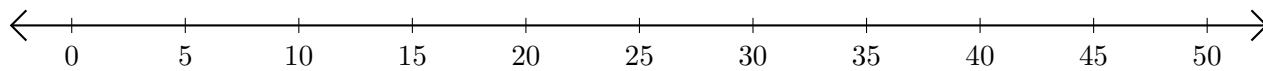


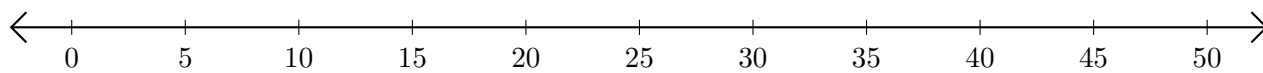
Opérations sur Une Droite Graduée (B)

Utilisez la droite graduée pour calculer chaque somme ou différence.

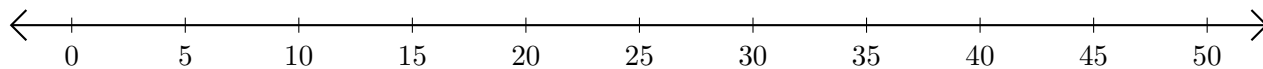
1. $15 + 20 = \underline{\quad}$



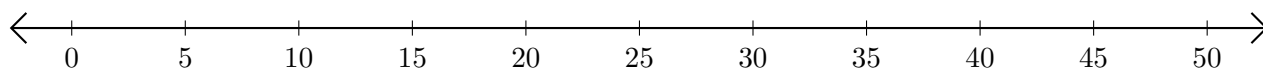
2. $45 - 35 = \underline{\quad}$



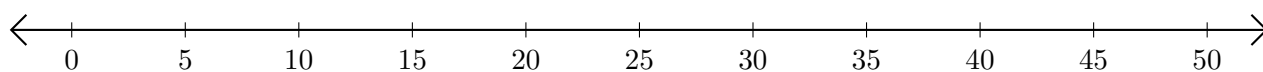
3. $10 + 10 = \underline{\quad}$



4. $50 - 45 = \underline{\quad}$



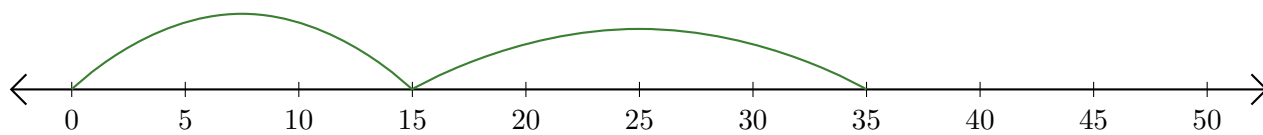
5. $50 - 30 = \underline{\quad}$



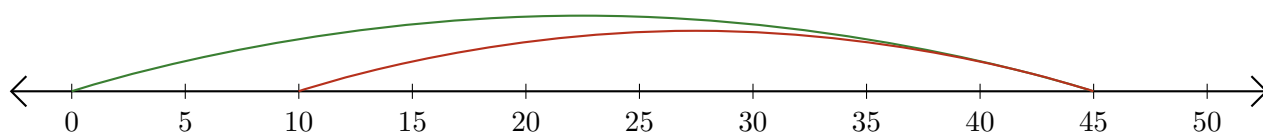
Opérations sur Une Droite Graduée (B) Réponses

Utilisez la droite graduée pour calculer chaque somme ou différence.

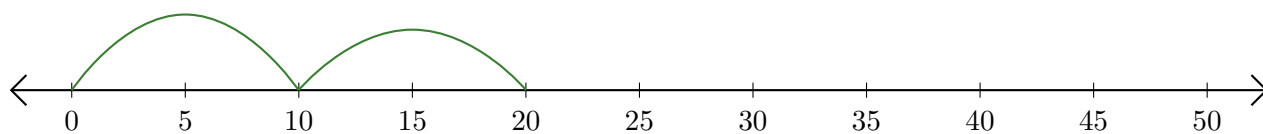
1. $15 + 20 = \underline{35}$



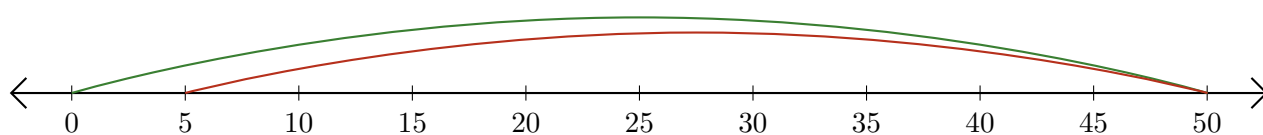
2. $45 - 35 = \underline{10}$



3. $10 + 10 = \underline{20}$



4. $50 - 45 = \underline{5}$



5. $50 - 30 = \underline{20}$

