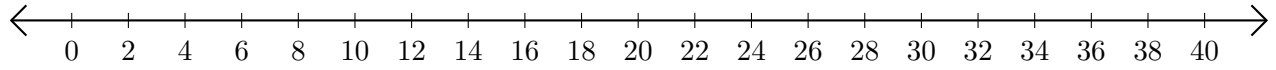


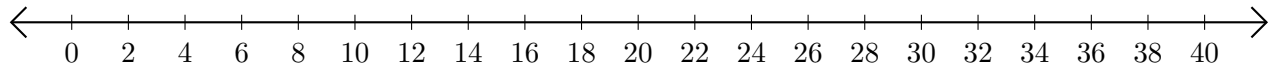
# Opérations sur Une Droite Graduée (G)

Utilisez la droite graduée pour calculer chaque somme ou différence.

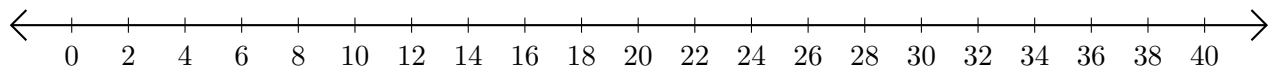
1.  $34 + 2 = \underline{\quad}$



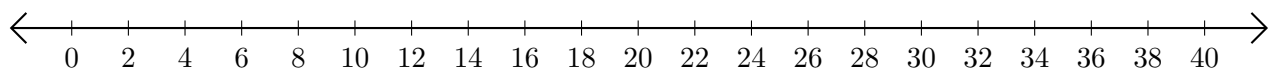
2.  $38 - 32 = \underline{\quad}$



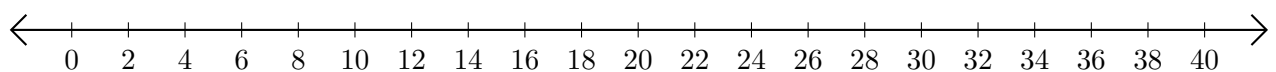
3.  $2 + 22 = \underline{\quad}$



4.  $40 - 8 = \underline{\quad}$



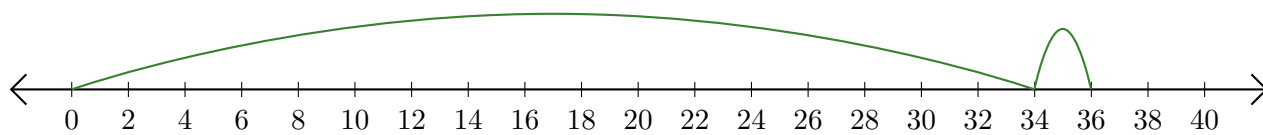
5.  $20 - 12 = \underline{\quad}$



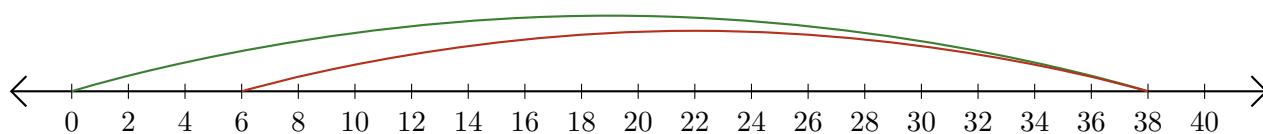
# Opérations sur Une Droite Graduée (G) Réponses

Utilisez la droite graduée pour calculer chaque somme ou différence.

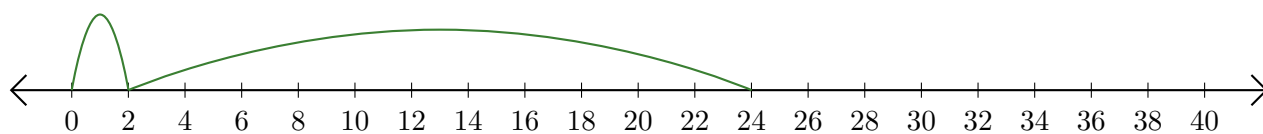
1.  $34 + 2 = \underline{36}$



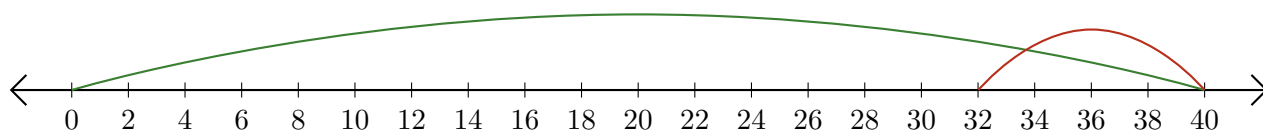
2.  $38 - 32 = \underline{6}$



3.  $2 + 22 = \underline{24}$



4.  $40 - 8 = \underline{32}$



5.  $20 - 12 = \underline{8}$

