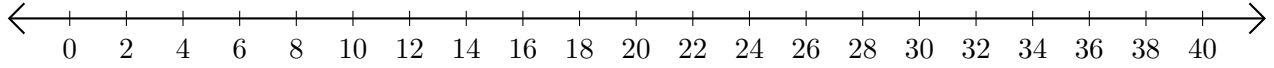


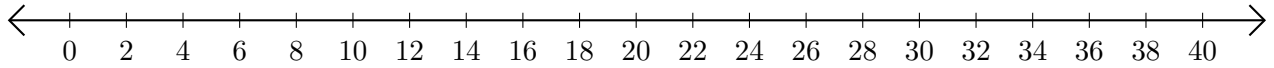
# Opérations sur Une Droite Graduée (F)

Utilisez la droite graduée pour calculer chaque somme ou différence.

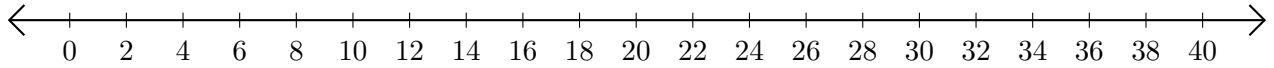
1.  $36 + 4 = \underline{\quad}$



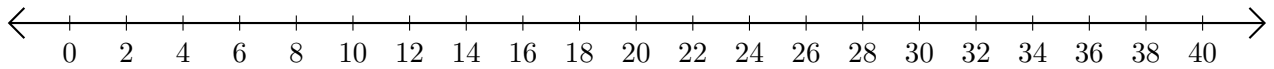
2.  $40 - 10 = \underline{\quad}$



3.  $24 + 10 = \underline{\quad}$



4.  $38 - 16 = \underline{\quad}$



5.  $40 - 14 = \underline{\quad}$

