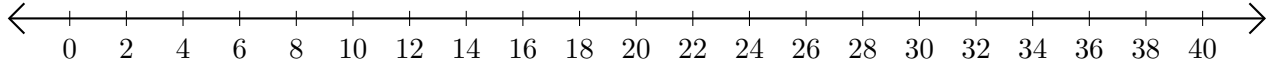


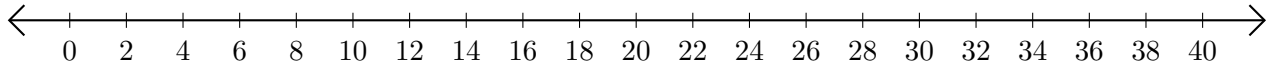
Opérations sur Une Droite Graduée (E)

Utilisez la droite graduée pour calculer chaque somme ou différence.

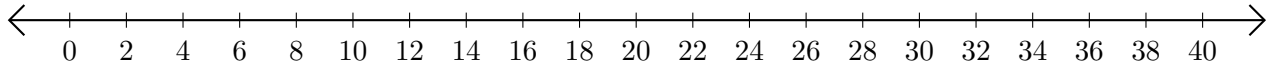
1. $32 + 8 = \underline{\quad}$



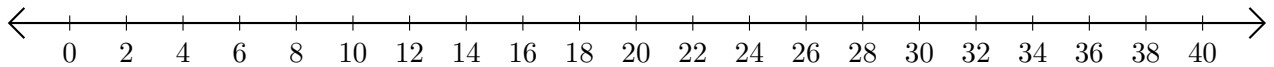
2. $30 - 16 = \underline{\quad}$



3. $36 + 4 = \underline{\quad}$



4. $36 - 34 = \underline{\quad}$



5. $24 + 16 = \underline{\quad}$

