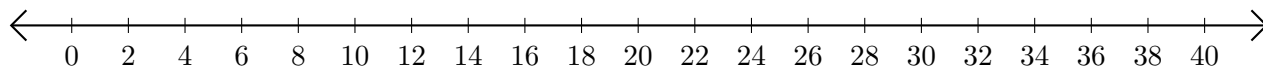


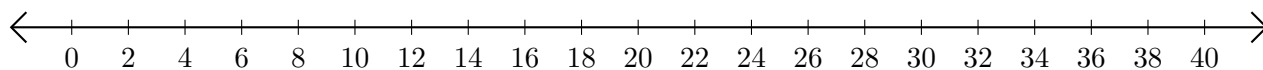
Opérations sur Une Droite Graduée (B)

Utilisez la droite graduée pour calculer chaque somme ou différence.

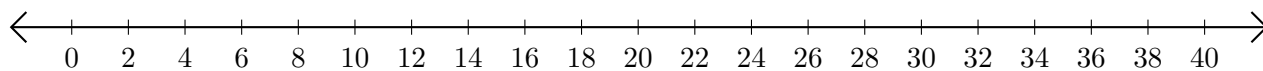
1. $10 + 30 = \underline{\quad}$



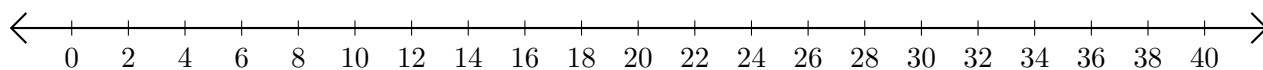
2. $38 - 16 = \underline{\quad}$



3. $32 + 4 = \underline{\quad}$



4. $32 - 6 = \underline{\quad}$



5. $20 + 20 = \underline{\quad}$

