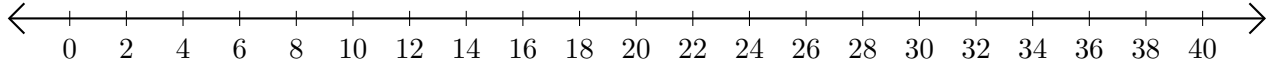


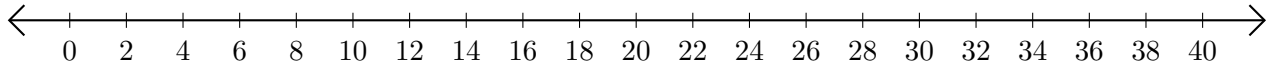
Opérations sur Une Droite Graduée (A)

Utilisez la droite graduée pour calculer chaque somme ou différence.

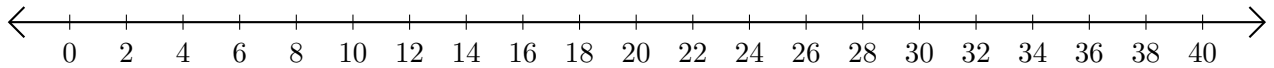
1. $12 + 12 = \underline{\quad}$



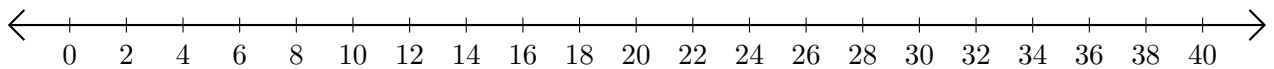
2. $40 - 30 = \underline{\quad}$



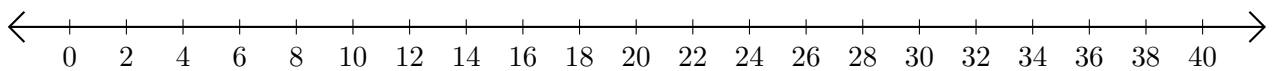
3. $28 + 10 = \underline{\quad}$



4. $38 - 36 = \underline{\quad}$



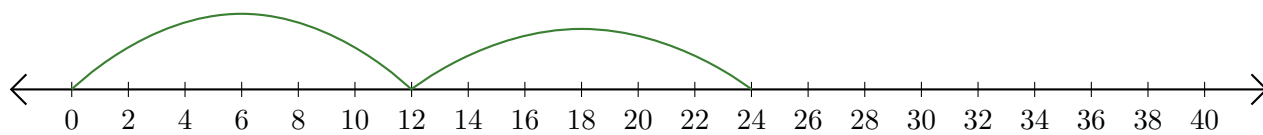
5. $20 + 2 = \underline{\quad}$



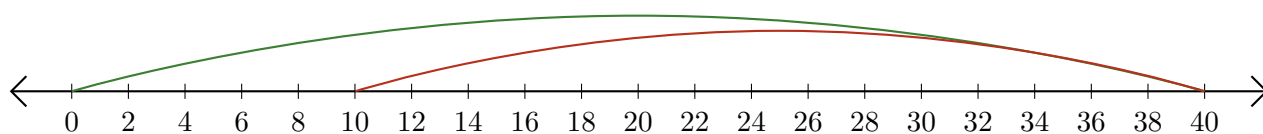
Opérations sur Une Droite Graduée (A) Réponses

Utilisez la droite graduée pour calculer chaque somme ou différence.

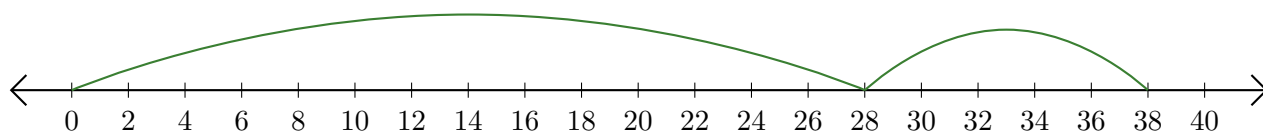
1. $12 + 12 = \underline{24}$



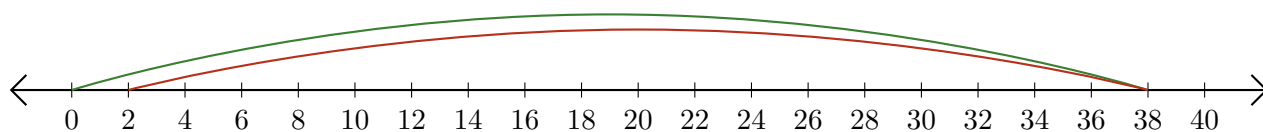
2. $40 - 30 = \underline{10}$



3. $28 + 10 = \underline{38}$



4. $38 - 36 = \underline{2}$



5. $20 + 2 = \underline{22}$

