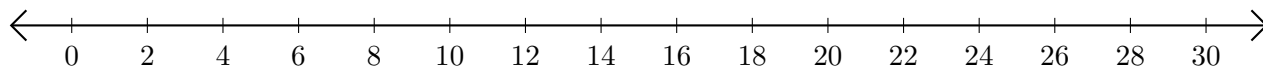


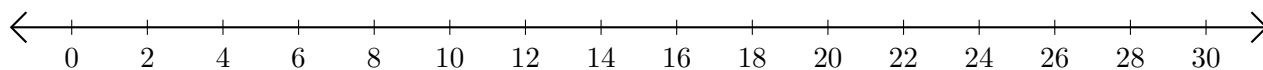
# Opérations sur Une Droite Graduée (F)

Utilisez la droite graduée pour calculer chaque somme ou différence.

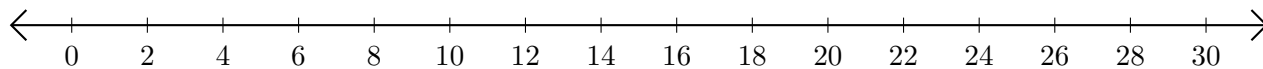
1.  $8 + 18 = \underline{\hspace{2cm}}$



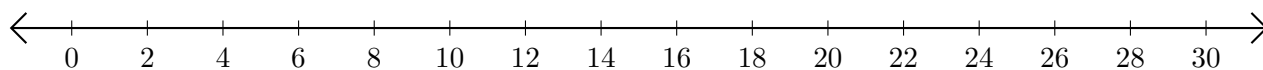
2.  $28 - 14 = \underline{\hspace{2cm}}$



3.  $18 + 6 = \underline{\hspace{2cm}}$



4.  $16 - 2 = \underline{\hspace{2cm}}$



5.  $28 - 6 = \underline{\hspace{2cm}}$

