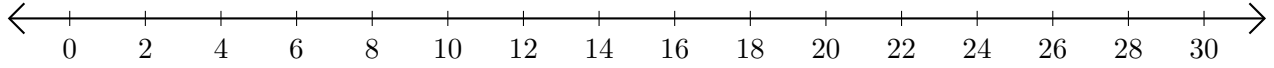


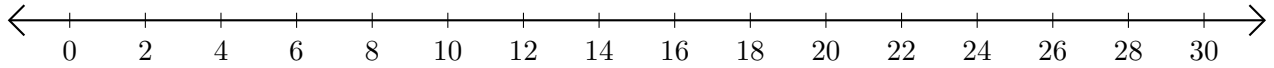
Opérations sur Une Droite Graduée (E)

Utilisez la droite graduée pour calculer chaque somme ou différence.

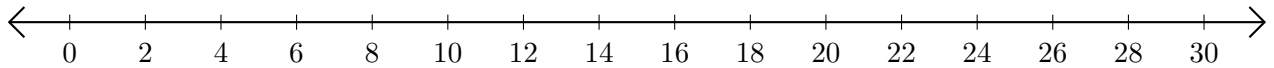
1. $2 + 18 = \underline{\quad}$



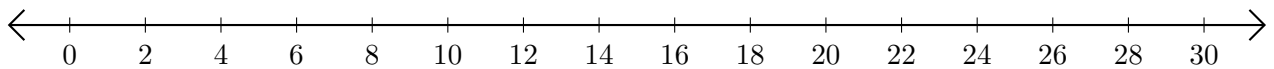
2. $30 - 8 = \underline{\quad}$



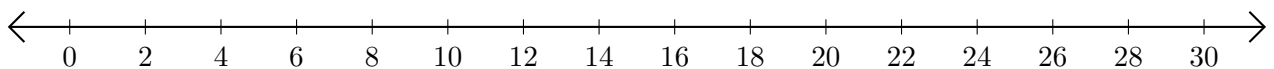
3. $22 + 2 = \underline{\quad}$



4. $26 - 4 = \underline{\quad}$



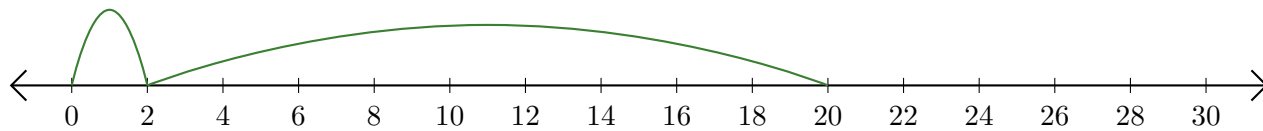
5. $18 - 14 = \underline{\quad}$



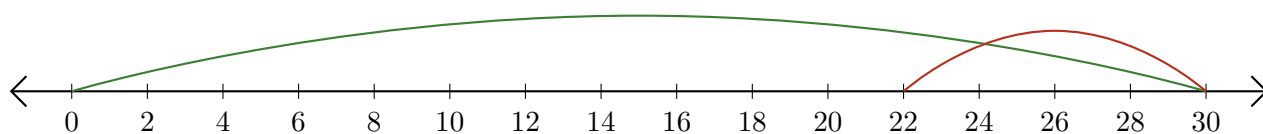
Opérations sur Une Droite Graduée (E) Réponses

Utilisez la droite graduée pour calculer chaque somme ou différence.

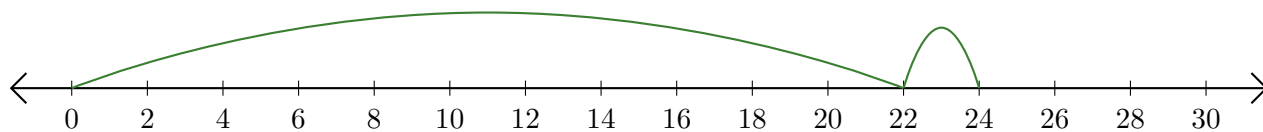
1. $2 + 18 = \underline{20}$



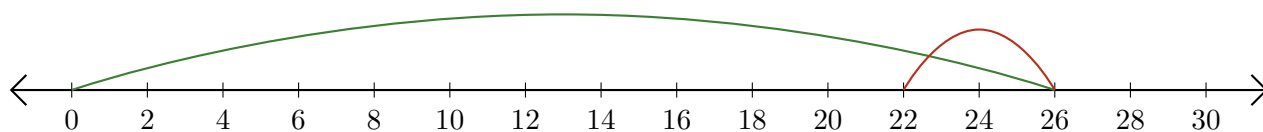
2. $30 - 8 = \underline{22}$



3. $22 + 2 = \underline{24}$



4. $26 - 4 = \underline{22}$



5. $18 - 14 = \underline{4}$

