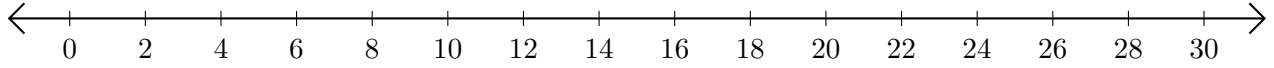


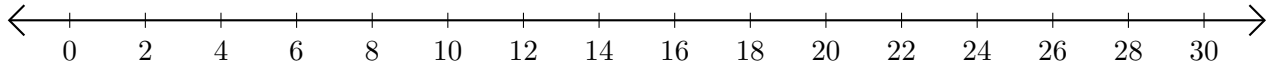
Opérations sur Une Droite Graduée (D)

Utilisez la droite graduée pour calculer chaque somme ou différence.

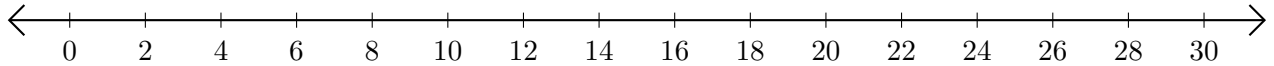
1. $16 + 4 = \underline{\quad}$



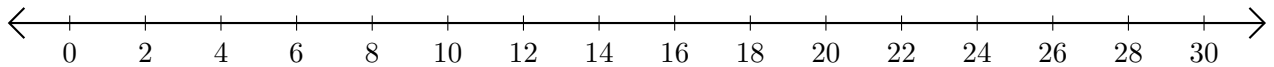
2. $28 - 12 = \underline{\quad}$



3. $14 + 4 = \underline{\quad}$



4. $18 - 8 = \underline{\quad}$



5. $28 + 2 = \underline{\quad}$

