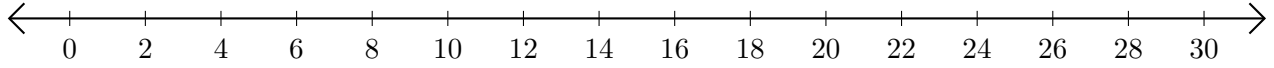


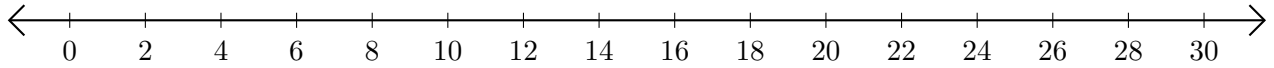
# Opérations sur Une Droite Graduée (D)

Utilisez la droite graduée pour calculer chaque somme ou différence.

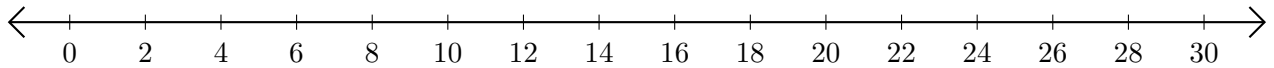
1.  $16 + 4 = \underline{\quad}$



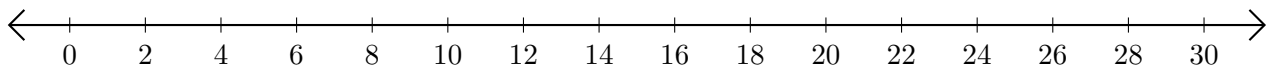
2.  $28 - 12 = \underline{\quad}$



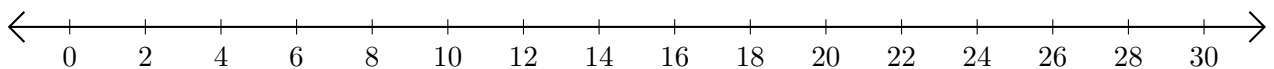
3.  $14 + 4 = \underline{\quad}$



4.  $18 - 8 = \underline{\quad}$



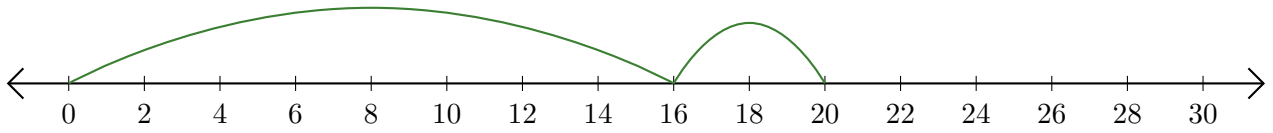
5.  $28 + 2 = \underline{\quad}$



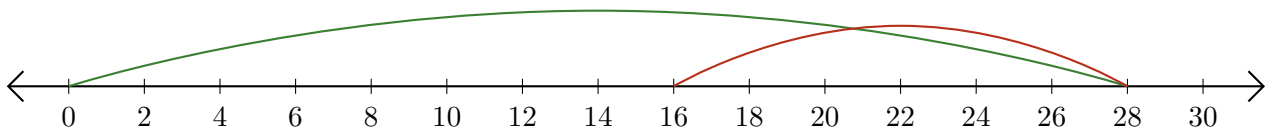
# Opérations sur Une Droite Graduée (D) Réponses

Utilisez la droite graduée pour calculer chaque somme ou différence.

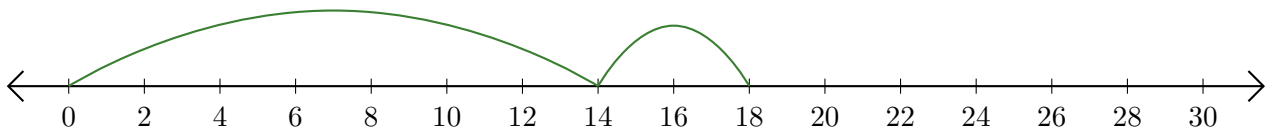
1.  $16 + 4 = \underline{20}$



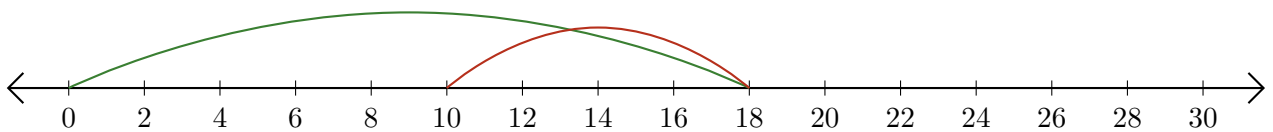
2.  $28 - 12 = \underline{16}$



3.  $14 + 4 = \underline{18}$



4.  $18 - 8 = \underline{10}$



5.  $28 + 2 = \underline{30}$

