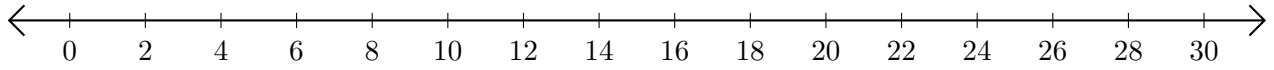


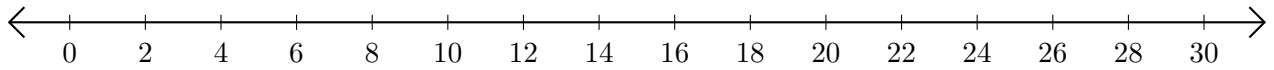
## Opérations sur Une Droite Graduée (C)

Utilisez la droite graduée pour calculer chaque somme ou différence.

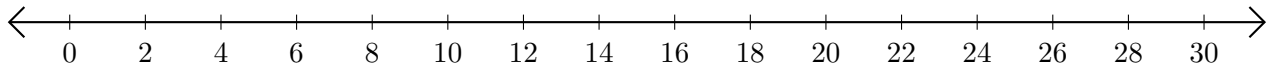
1.  $18 + 8 = \underline{\quad}$



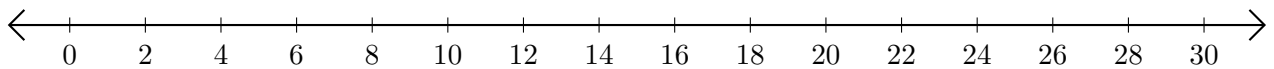
2.  $28 - 26 = \underline{\quad}$



3.  $6 + 16 = \underline{\quad}$



4.  $26 - 8 = \underline{\quad}$



5.  $16 - 2 = \underline{\quad}$

