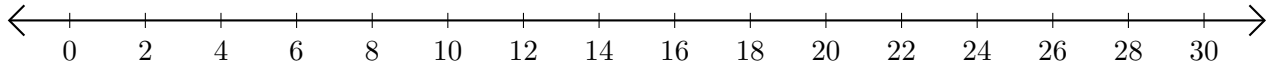


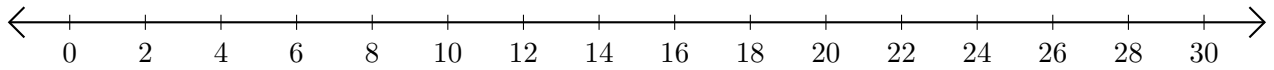
Opérations sur Une Droite Graduée (A)

Utilisez la droite graduée pour calculer chaque somme ou différence.

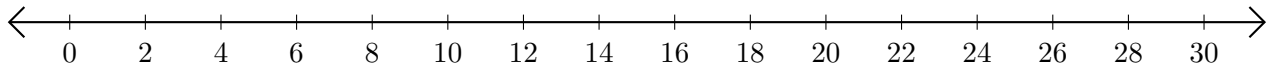
1. $14 + 16 = \underline{\quad}$



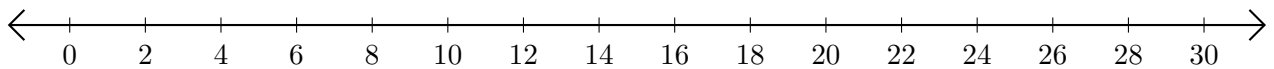
2. $30 - 10 = \underline{\quad}$



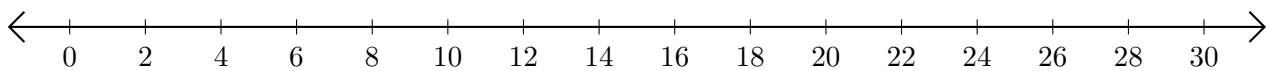
3. $26 + 2 = \underline{\quad}$



4. $30 - 28 = \underline{\quad}$



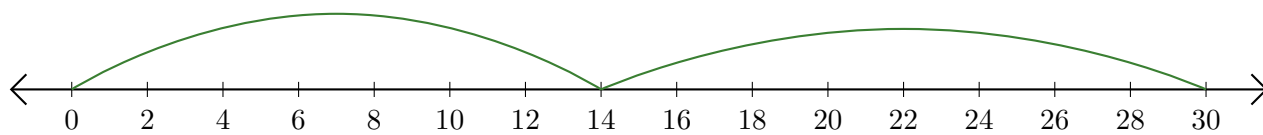
5. $22 + 8 = \underline{\quad}$



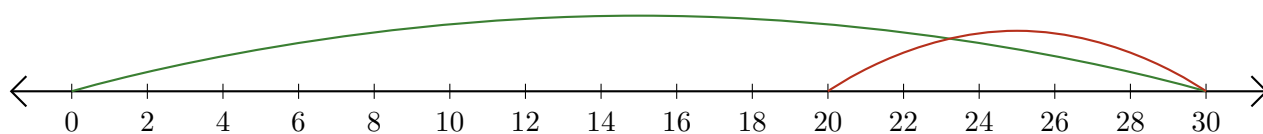
Opérations sur Une Droite Graduée (A) Réponses

Utilisez la droite graduée pour calculer chaque somme ou différence.

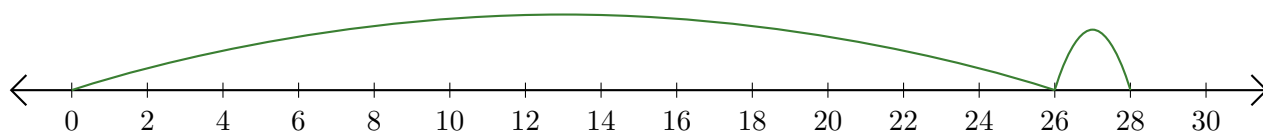
1. $14 + 16 = \underline{30}$



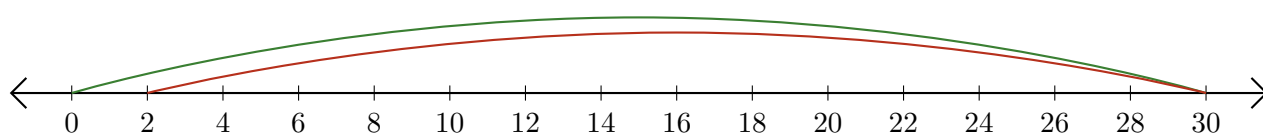
2. $30 - 10 = \underline{20}$



3. $26 + 2 = \underline{28}$



4. $30 - 28 = \underline{2}$



5. $22 + 8 = \underline{30}$

