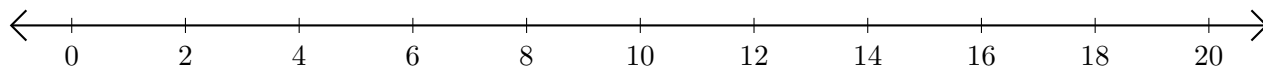


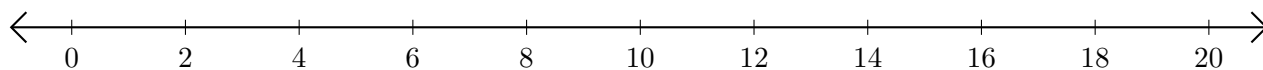
Opérations sur Une Droite Graduée (I)

Utilisez la droite graduée pour calculer chaque somme ou différence.

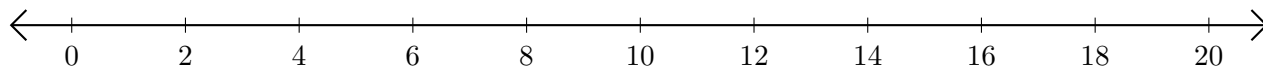
1. $16 + 2 = \underline{\quad}$



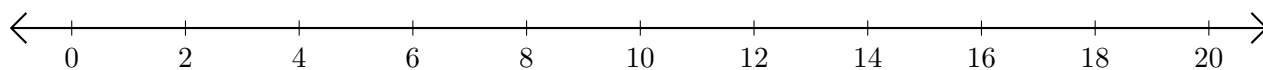
2. $14 - 8 = \underline{\quad}$



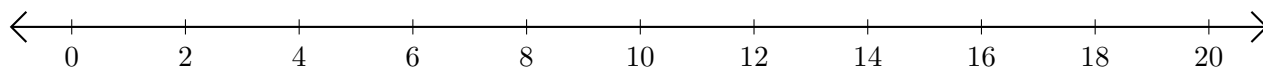
3. $12 + 8 = \underline{\quad}$



4. $10 - 2 = \underline{\quad}$



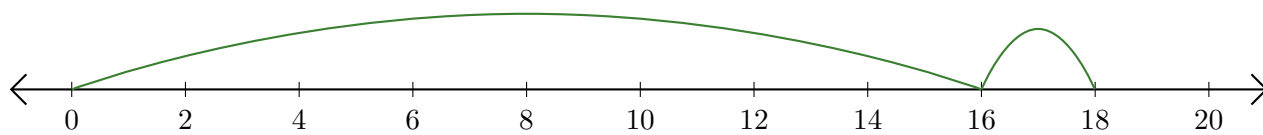
5. $18 + 2 = \underline{\quad}$



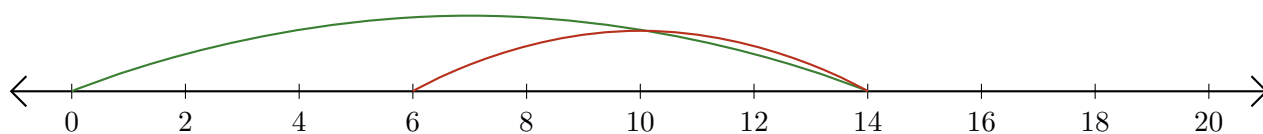
Opérations sur Une Droite Graduée (I) Réponses

Utilisez la droite graduée pour calculer chaque somme ou différence.

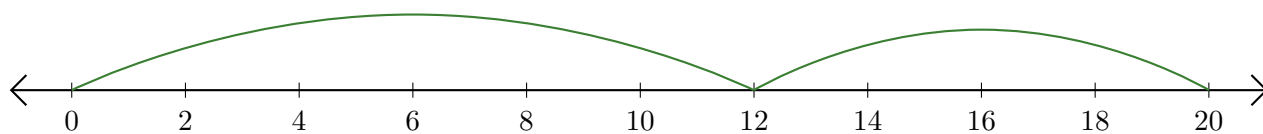
1. $16 + 2 = \underline{18}$



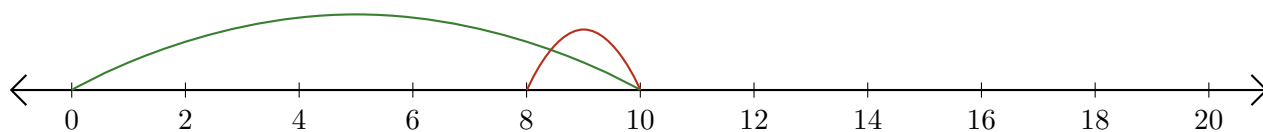
2. $14 - 8 = \underline{6}$



3. $12 + 8 = \underline{20}$



4. $10 - 2 = \underline{8}$



5. $18 + 2 = \underline{20}$

