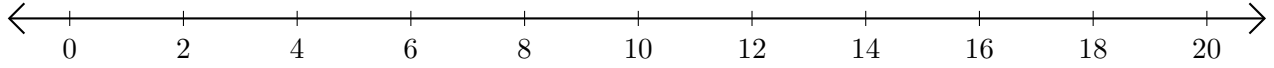


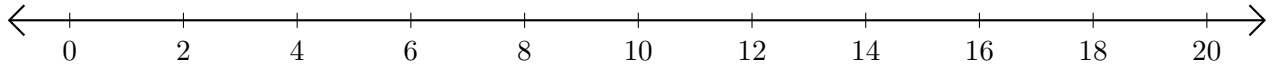
Opérations sur Une Droite Graduée (H)

Utilisez la droite graduée pour calculer chaque somme ou différence.

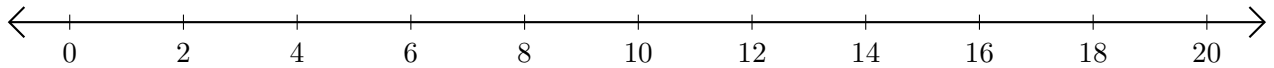
1. $8 + 12 = \underline{\quad}$



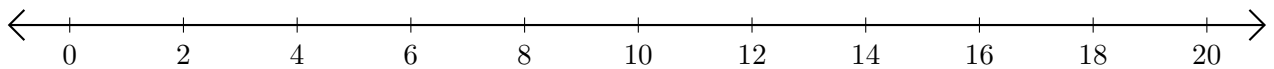
2. $20 - 16 = \underline{\quad}$



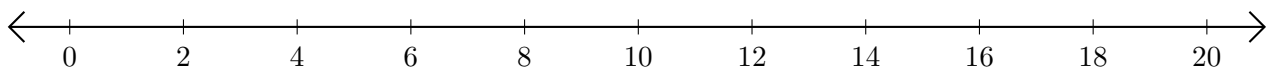
3. $14 + 6 = \underline{\quad}$



4. $14 - 12 = \underline{\quad}$



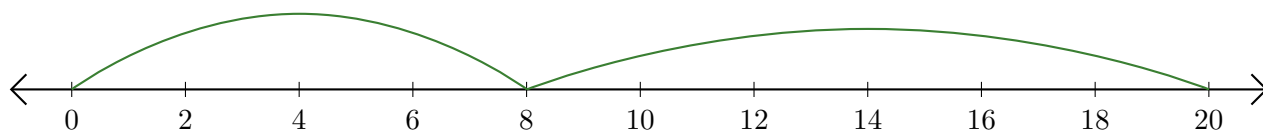
5. $18 - 10 = \underline{\quad}$



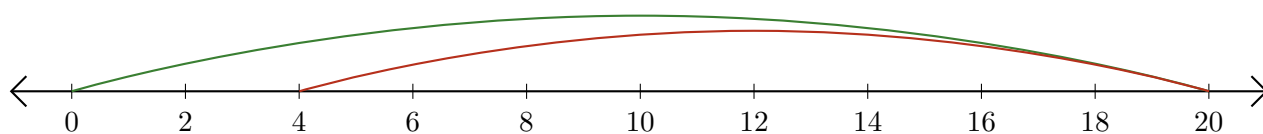
Opérations sur Une Droite Graduée (H) Réponses

Utilisez la droite graduée pour calculer chaque somme ou différence.

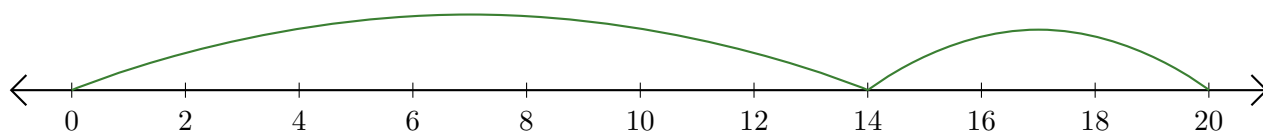
1. $8 + 12 = \underline{20}$



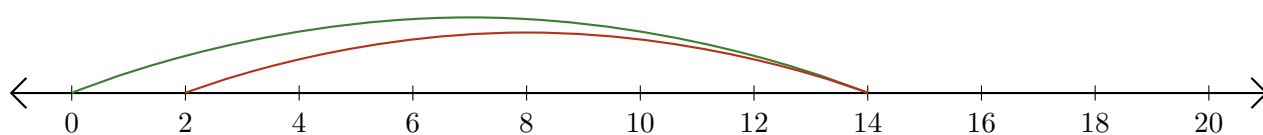
2. $20 - 16 = \underline{4}$



3. $14 + 6 = \underline{20}$



4. $14 - 12 = \underline{2}$



5. $18 - 10 = \underline{8}$

