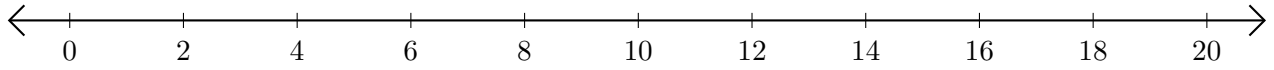


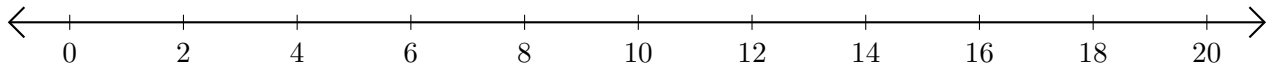
Opérations sur Une Droite Graduée (C)

Utilisez la droite graduée pour calculer chaque somme ou différence.

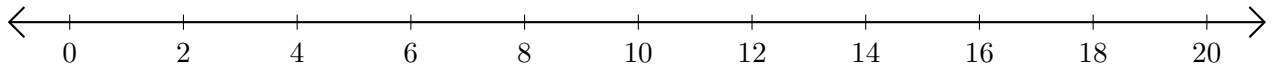
1. $2 + 18 = \underline{\quad}$



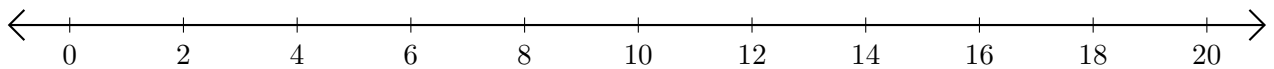
2. $18 - 4 = \underline{\quad}$



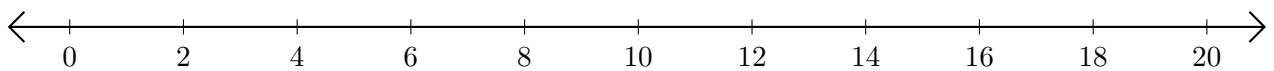
3. $14 + 6 = \underline{\quad}$



4. $20 - 10 = \underline{\quad}$



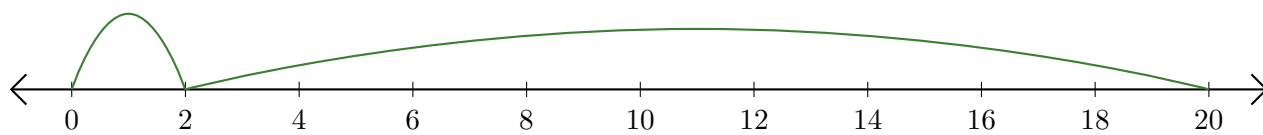
5. $8 + 8 = \underline{\quad}$



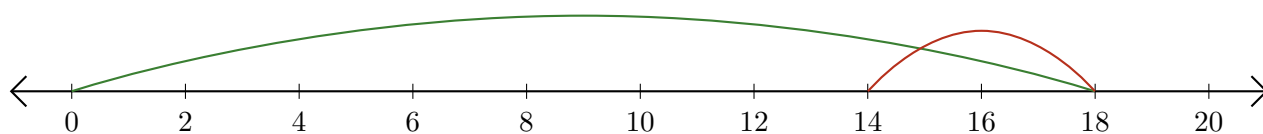
Opérations sur Une Droite Graduée (C) Réponses

Utilisez la droite graduée pour calculer chaque somme ou différence.

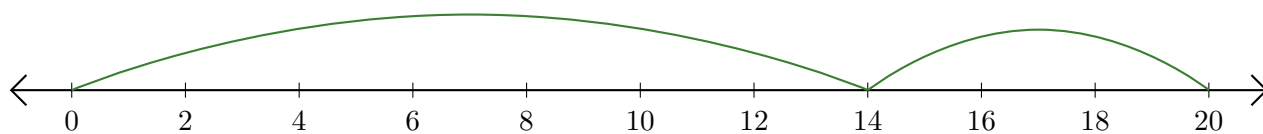
1. $2 + 18 = \underline{20}$



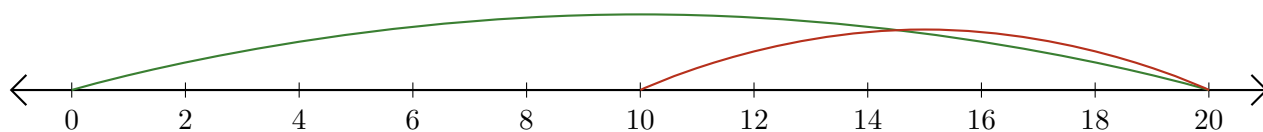
2. $18 - 4 = \underline{14}$



3. $14 + 6 = \underline{20}$



4. $20 - 10 = \underline{10}$



5. $8 + 8 = \underline{16}$

