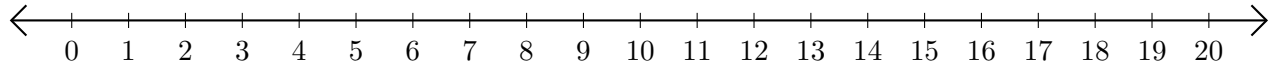


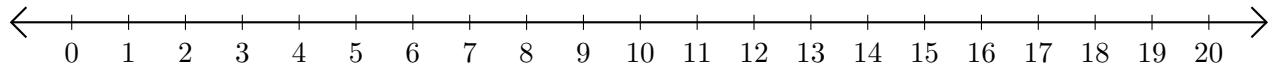
Opérations sur Une Droite Graduée (G)

Utilisez la droite graduée pour calculer chaque somme ou différence.

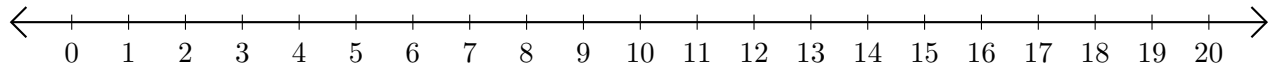
1. $4 + 11 = \underline{\quad}$



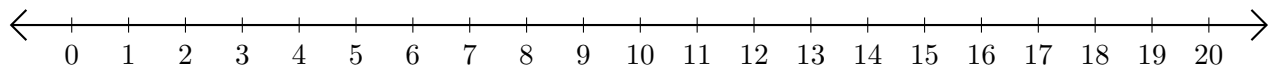
2. $13 - 5 = \underline{\quad}$



3. $8 + 7 = \underline{\quad}$



4. $4 - 1 = \underline{\quad}$



5. $12 - 7 = \underline{\quad}$

