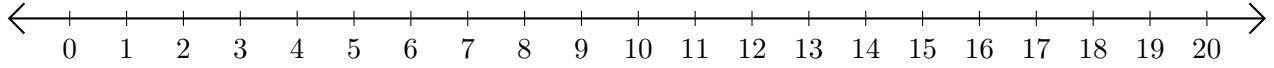


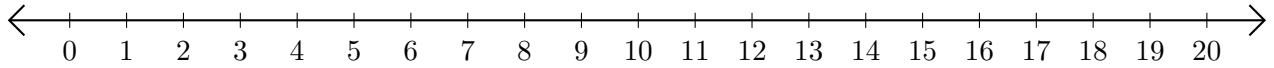
Opérations sur Une Droite Graduée (D)

Utilisez la droite graduée pour calculer chaque somme ou différence.

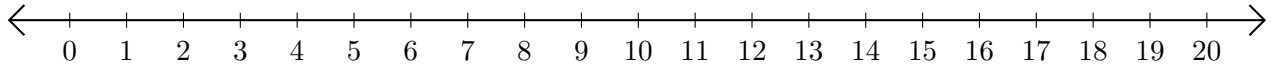
1. $2 + 13 = \underline{\quad}$



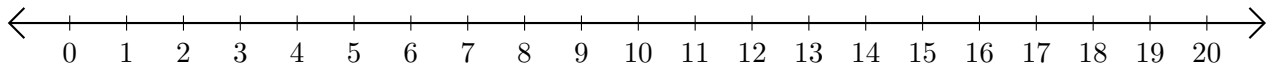
2. $17 - 15 = \underline{\quad}$



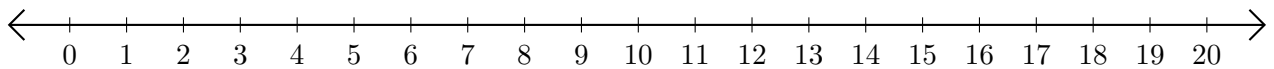
3. $12 + 1 = \underline{\quad}$



4. $19 - 14 = \underline{\quad}$



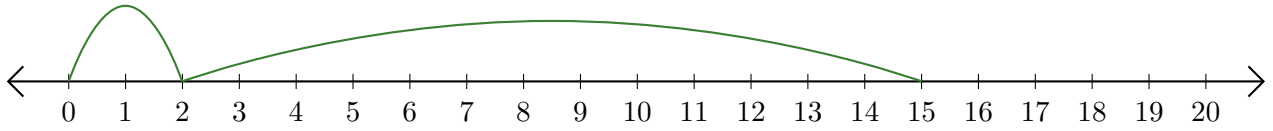
5. $8 + 8 = \underline{\quad}$



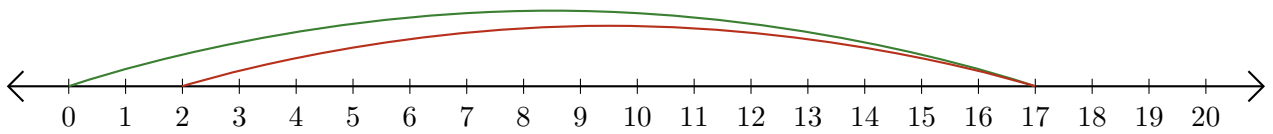
Opérations sur Une Droite Graduée (D) Réponses

Utilisez la droite graduée pour calculer chaque somme ou différence.

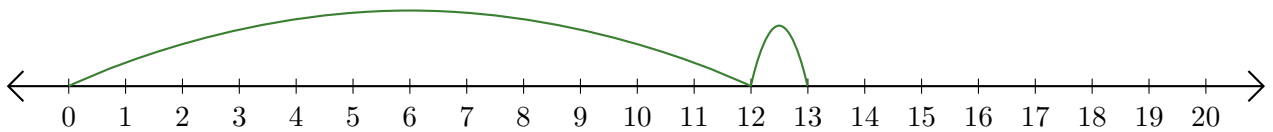
1. $2 + 13 = \underline{15}$



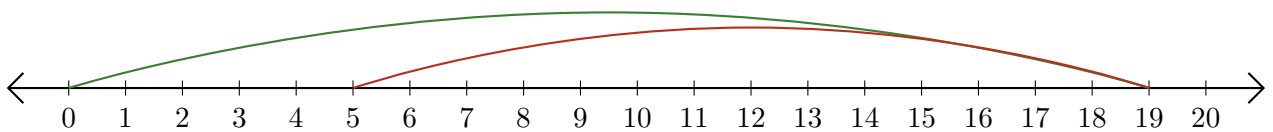
2. $17 - 15 = \underline{2}$



3. $12 + 1 = \underline{13}$



4. $19 - 14 = \underline{5}$



5. $8 + 8 = \underline{16}$

