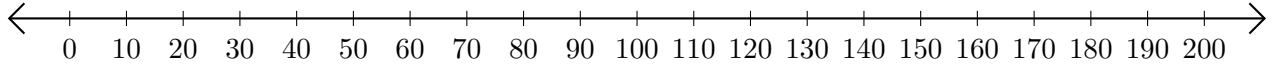


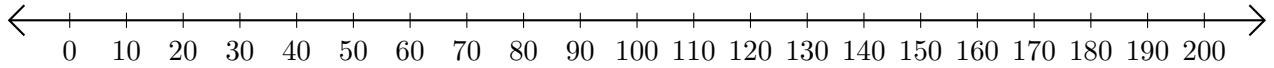
# Opérations sur Une Droite Graduée (H)

Utilisez la droite graduée pour calculer chaque somme ou différence.

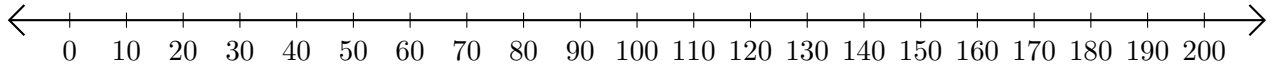
1.  $120 + 60 = \underline{\hspace{2cm}}$



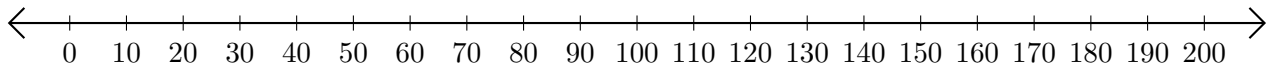
2.  $90 - 50 = \underline{\hspace{2cm}}$



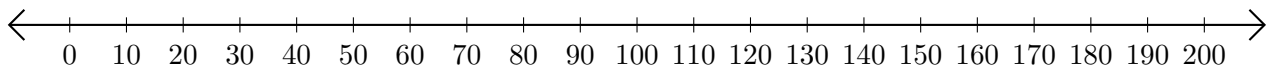
3.  $150 + 20 = \underline{\hspace{2cm}}$



4.  $190 - 160 = \underline{\hspace{2cm}}$



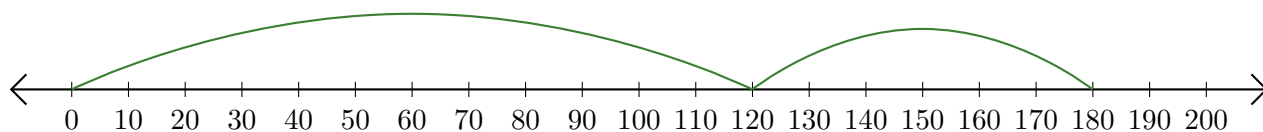
5.  $130 - 20 = \underline{\hspace{2cm}}$



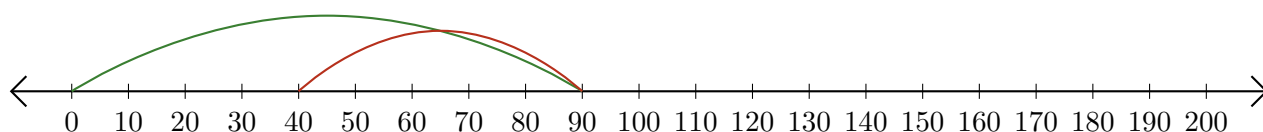
# Opérations sur Une Droite Graduée (H) Réponses

Utilisez la droite graduée pour calculer chaque somme ou différence.

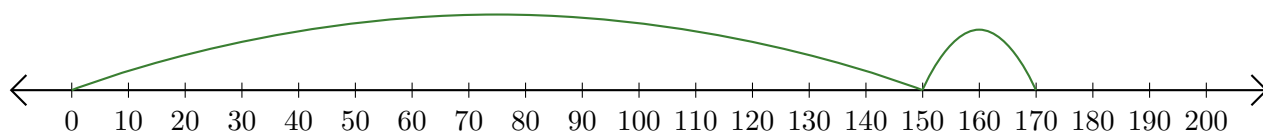
1.  $120 + 60 = \underline{180}$



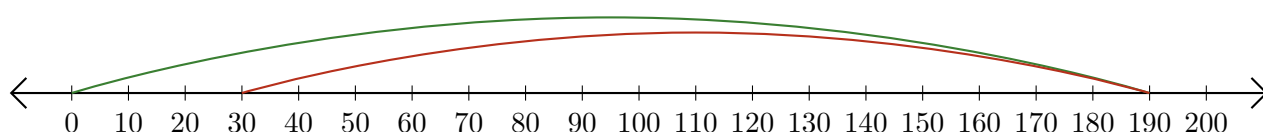
2.  $90 - 50 = \underline{40}$



3.  $150 + 20 = \underline{170}$



4.  $190 - 160 = \underline{30}$



5.  $130 - 20 = \underline{110}$

