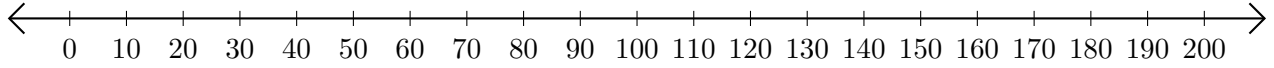


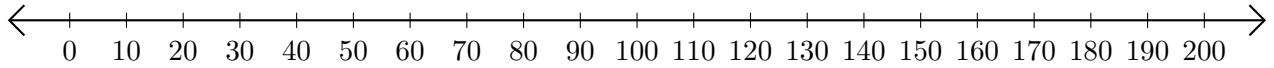
Opérations sur Une Droite Graduée (G)

Utilisez la droite graduée pour calculer chaque somme ou différence.

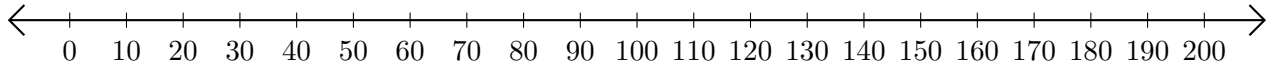
1. $50 + 80 = \underline{\hspace{2cm}}$



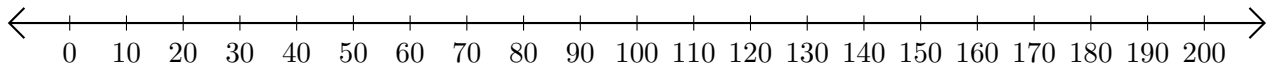
2. $200 - 90 = \underline{\hspace{2cm}}$



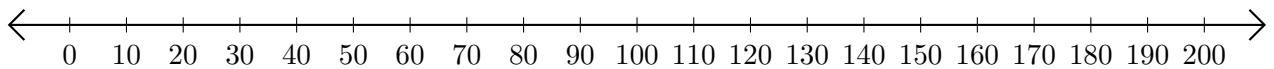
3. $80 + 60 = \underline{\hspace{2cm}}$



4. $200 - 160 = \underline{\hspace{2cm}}$



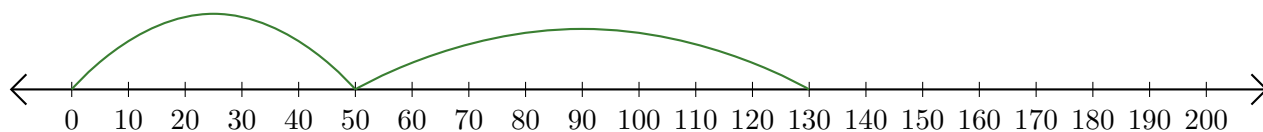
5. $150 + 40 = \underline{\hspace{2cm}}$



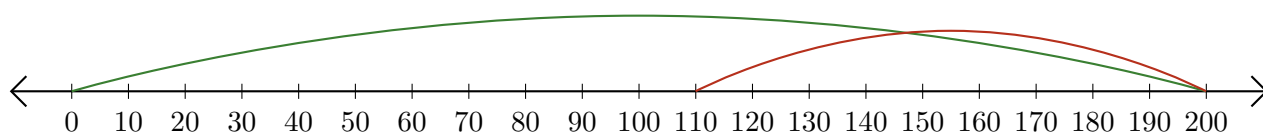
Opérations sur Une Droite Graduée (G) Réponses

Utilisez la droite graduée pour calculer chaque somme ou différence.

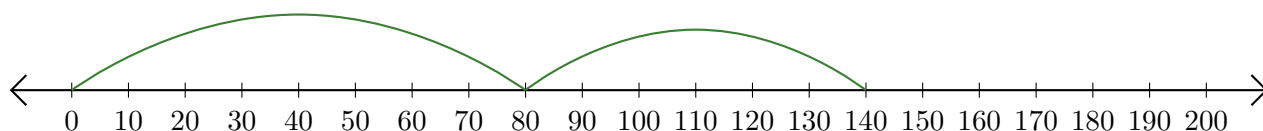
1. $50 + 80 = \underline{130}$



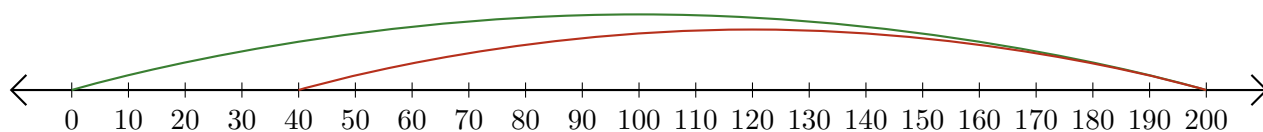
2. $200 - 90 = \underline{110}$



3. $80 + 60 = \underline{140}$



4. $200 - 160 = \underline{40}$



5. $150 + 40 = \underline{190}$

