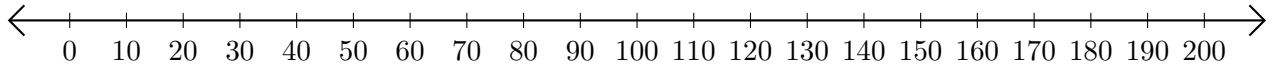


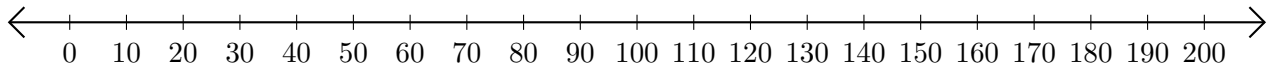
Opérations sur Une Droite Graduée (A)

Utilisez la droite graduée pour calculer chaque somme ou différence.

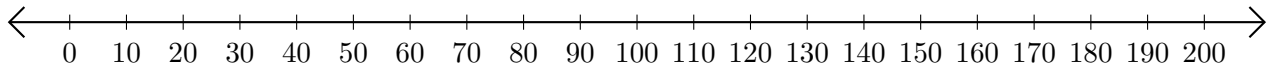
1. $90 + 70 = \underline{\hspace{2cm}}$



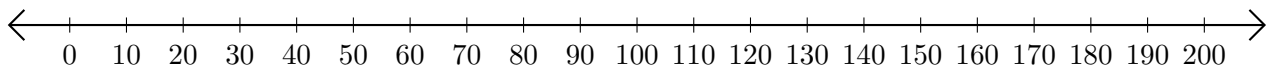
2. $190 - 180 = \underline{\hspace{2cm}}$



3. $140 + 50 = \underline{\hspace{2cm}}$



4. $200 - 50 = \underline{\hspace{2cm}}$



5. $190 - 80 = \underline{\hspace{2cm}}$

