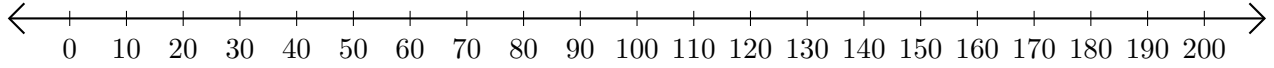


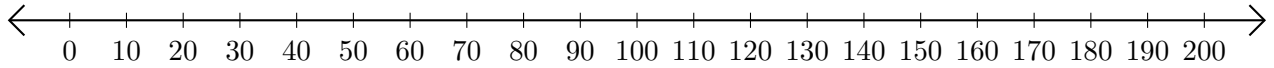
# Opérations sur Une Droite Graduée (A)

Utilisez la droite graduée pour calculer chaque somme ou différence.

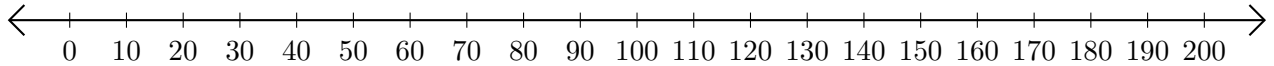
1.  $90 + 70 = \underline{\hspace{2cm}}$



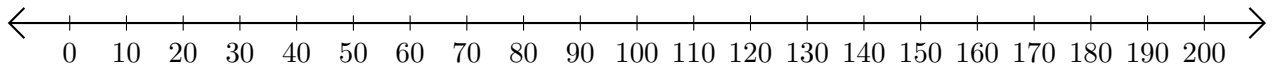
2.  $190 - 180 = \underline{\hspace{2cm}}$



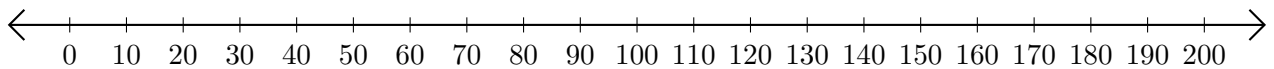
3.  $140 + 50 = \underline{\hspace{2cm}}$



4.  $200 - 50 = \underline{\hspace{2cm}}$



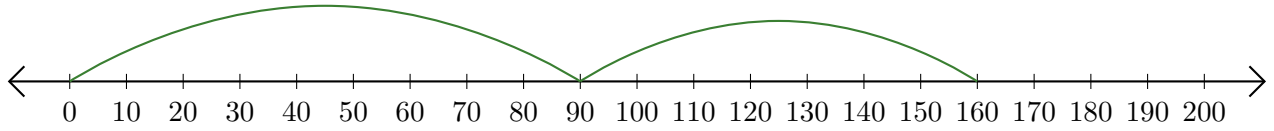
5.  $190 - 80 = \underline{\hspace{2cm}}$



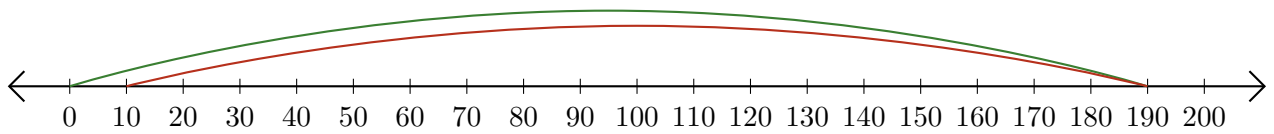
# Opérations sur Une Droite Graduée (A) Réponses

Utilisez la droite graduée pour calculer chaque somme ou différence.

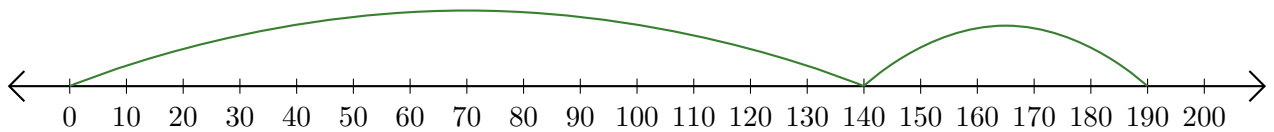
1.  $90 + 70 = \underline{160}$



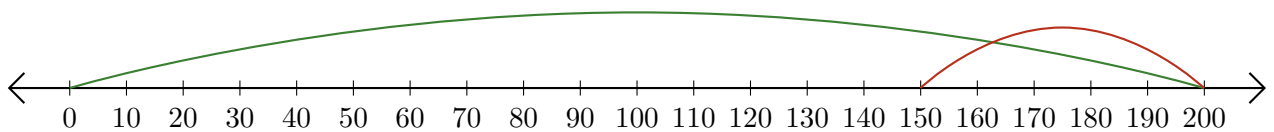
2.  $190 - 180 = \underline{10}$



3.  $140 + 50 = \underline{190}$



4.  $200 - 50 = \underline{150}$



5.  $190 - 80 = \underline{110}$

