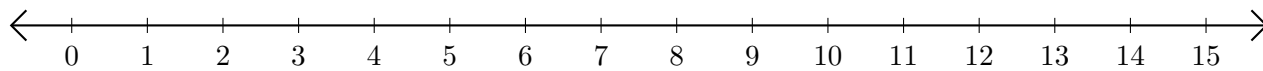


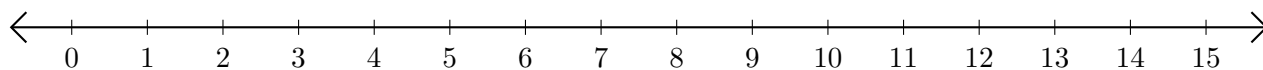
Opérations sur Une Droite Graduée (J)

Utilisez la droite graduée pour calculer chaque somme ou différence.

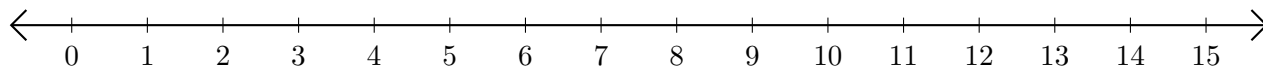
1. $11 + 2 = \underline{\quad}$



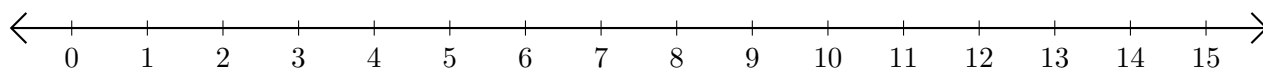
2. $12 - 2 = \underline{\quad}$



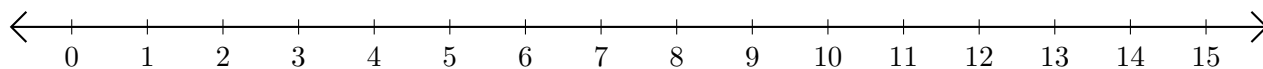
3. $10 + 3 = \underline{\quad}$



4. $11 - 3 = \underline{\quad}$



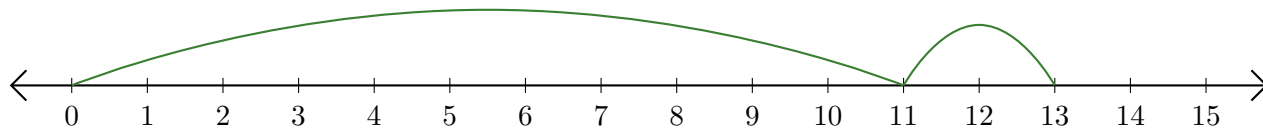
5. $8 + 2 = \underline{\quad}$



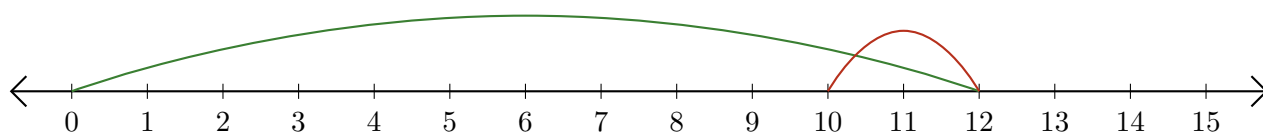
Opérations sur Une Droite Graduée (J) Réponses

Utilisez la droite graduée pour calculer chaque somme ou différence.

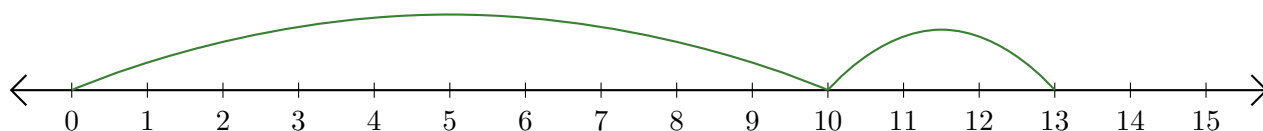
1. $11 + 2 = \underline{13}$



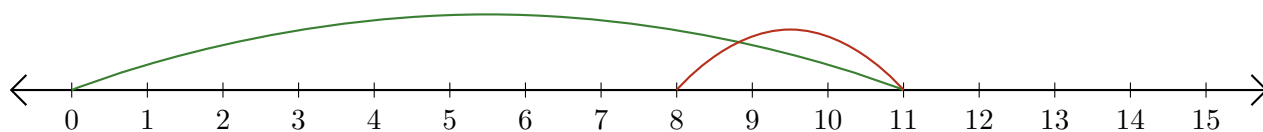
2. $12 - 2 = \underline{10}$



3. $10 + 3 = \underline{13}$



4. $11 - 3 = \underline{8}$



5. $8 + 2 = \underline{10}$

