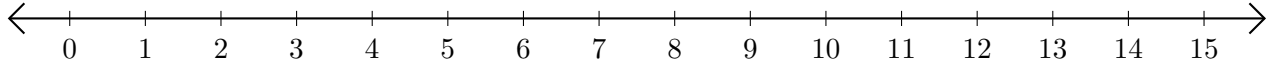


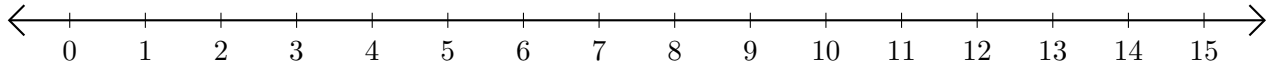
Opérations sur Une Droite Graduée (A)

Utilisez la droite graduée pour calculer chaque somme ou différence.

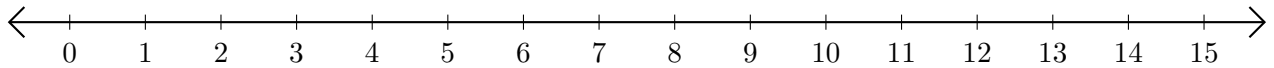
1. $14 + 1 = \underline{\quad}$



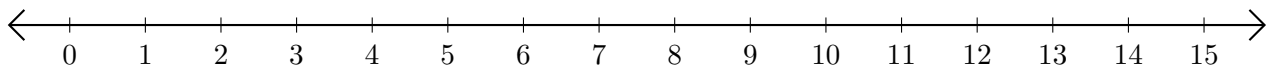
2. $13 - 12 = \underline{\quad}$



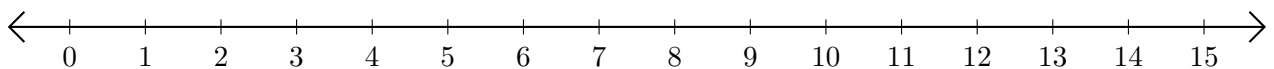
3. $7 + 2 = \underline{\quad}$



4. $13 - 10 = \underline{\quad}$



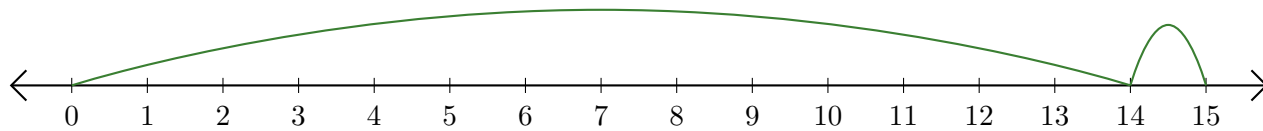
5. $9 + 3 = \underline{\quad}$



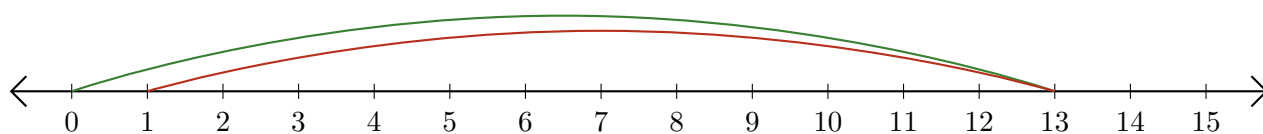
Opérations sur Une Droite Graduée (A) Réponses

Utilisez la droite graduée pour calculer chaque somme ou différence.

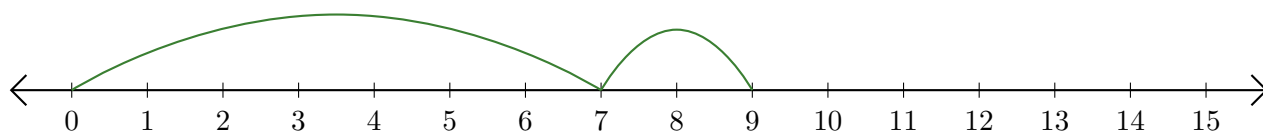
1. $14 + 1 = \underline{15}$



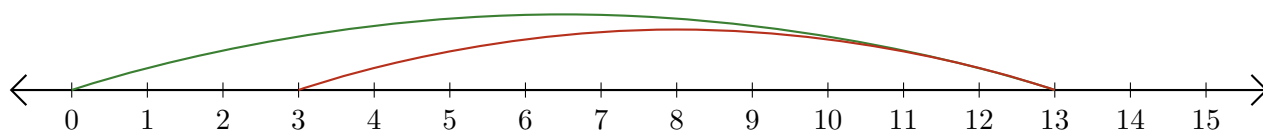
2. $13 - 12 = \underline{1}$



3. $7 + 2 = \underline{9}$



4. $13 - 10 = \underline{3}$



5. $9 + 3 = \underline{12}$

