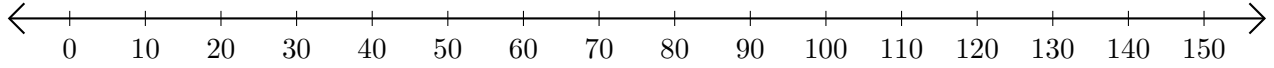


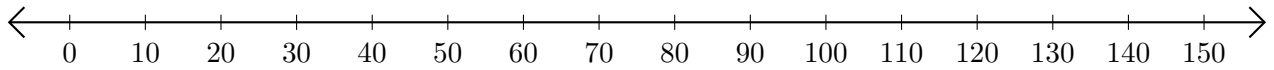
# Opérations sur Une Droite Graduée (J)

Utilisez la droite graduée pour calculer chaque somme ou différence.

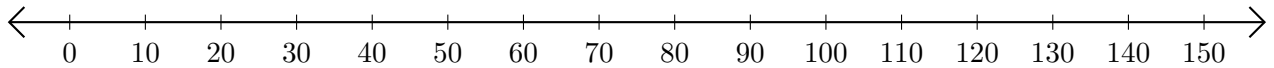
1.  $80 + 40 = \underline{\hspace{2cm}}$



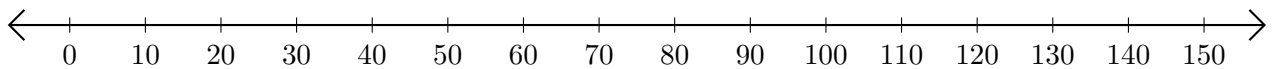
2.  $140 - 60 = \underline{\hspace{2cm}}$



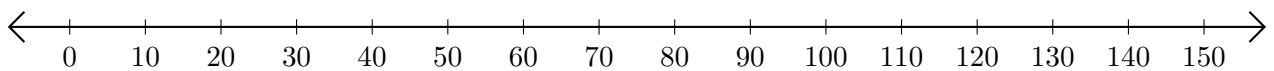
3.  $120 + 10 = \underline{\hspace{2cm}}$



4.  $50 - 40 = \underline{\hspace{2cm}}$



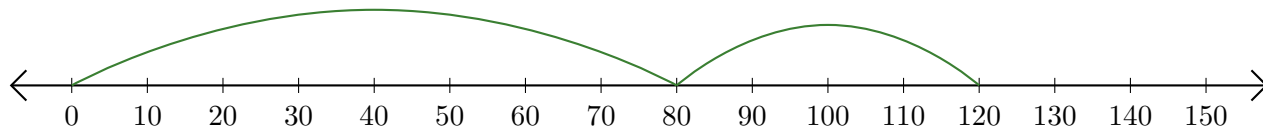
5.  $120 - 20 = \underline{\hspace{2cm}}$



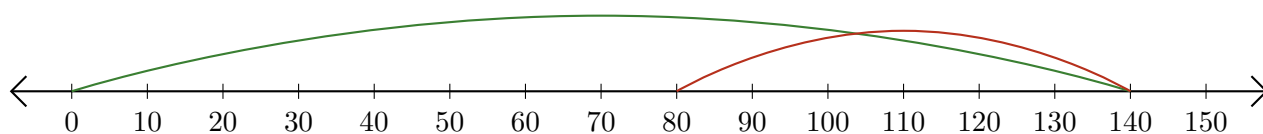
# Opérations sur Une Droite Graduée (J) Réponses

Utilisez la droite graduée pour calculer chaque somme ou différence.

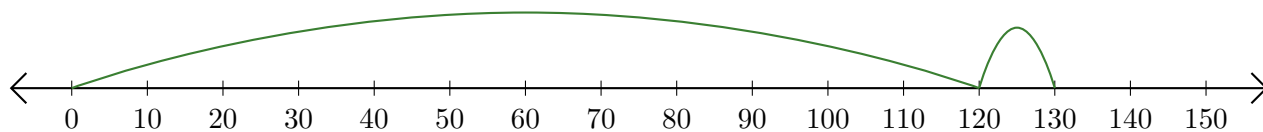
1.  $80 + 40 = \underline{120}$



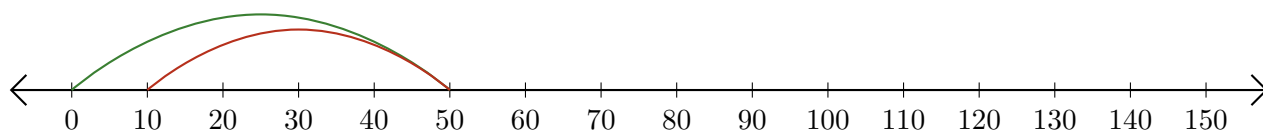
2.  $140 - 60 = \underline{80}$



3.  $120 + 10 = \underline{130}$



4.  $50 - 40 = \underline{10}$



5.  $120 - 20 = \underline{100}$

