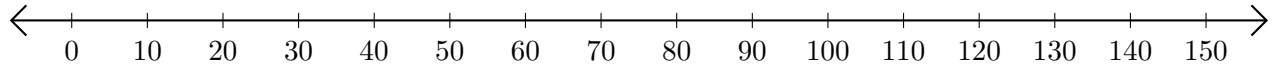


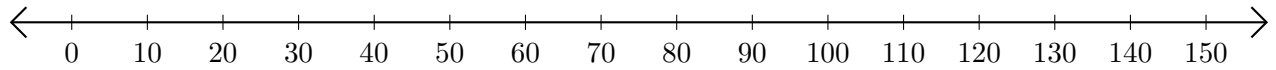
Opérations sur Une Droite Graduée (G)

Utilisez la droite graduée pour calculer chaque somme ou différence.

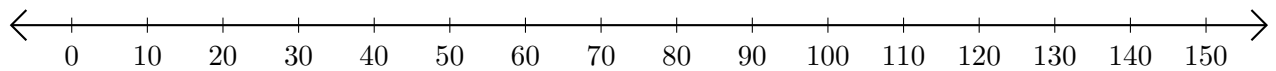
1. $100 + 40 = \underline{\hspace{2cm}}$



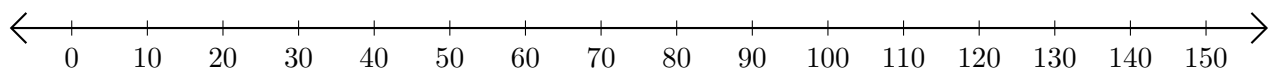
2. $140 - 10 = \underline{\hspace{2cm}}$



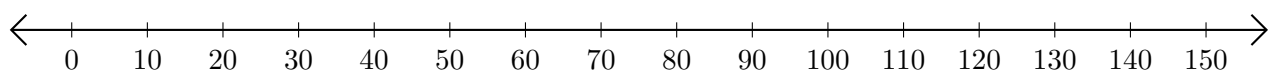
3. $30 + 100 = \underline{\hspace{2cm}}$



4. $70 - 50 = \underline{\hspace{2cm}}$



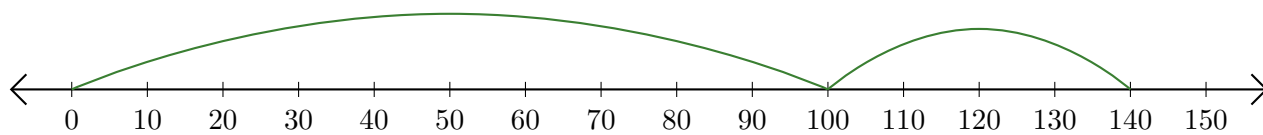
5. $130 - 80 = \underline{\hspace{2cm}}$



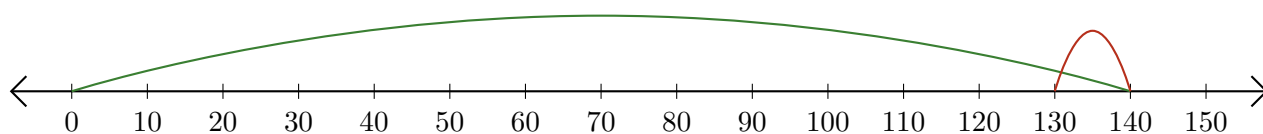
Opérations sur Une Droite Graduée (G) Réponses

Utilisez la droite graduée pour calculer chaque somme ou différence.

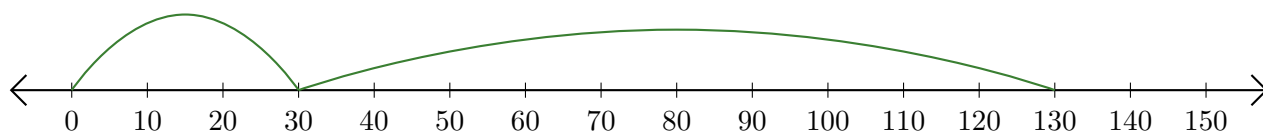
1. $100 + 40 = \underline{140}$



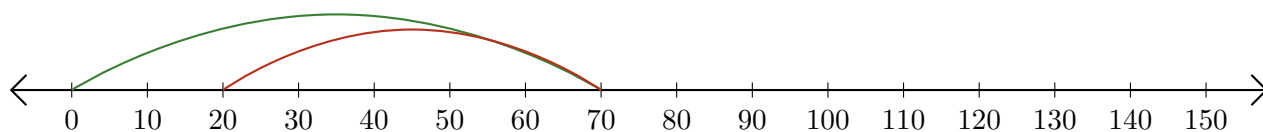
2. $140 - 10 = \underline{130}$



3. $30 + 100 = \underline{130}$



4. $70 - 50 = \underline{20}$



5. $130 - 80 = \underline{50}$

