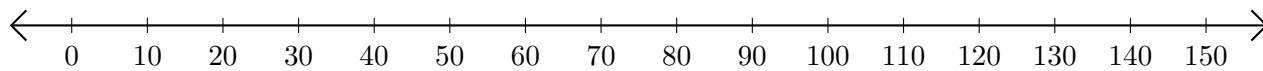


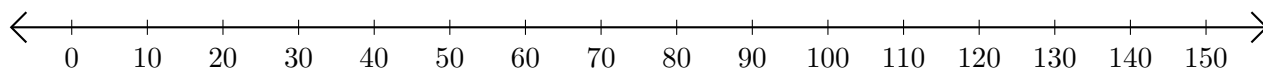
## Opérations sur Une Droite Graduée (F)

Utilisez la droite graduée pour calculer chaque somme ou différence.

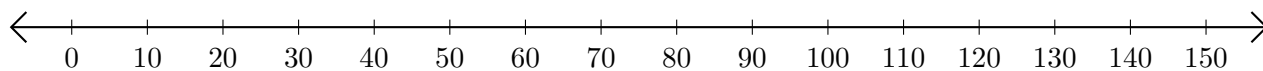
1.  $110 + 30 = \underline{\hspace{2cm}}$



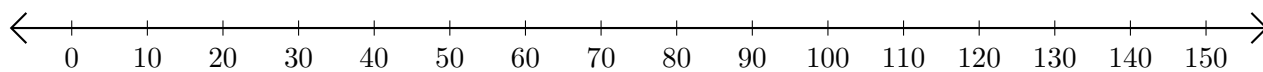
2.  $70 - 10 = \underline{\hspace{2cm}}$



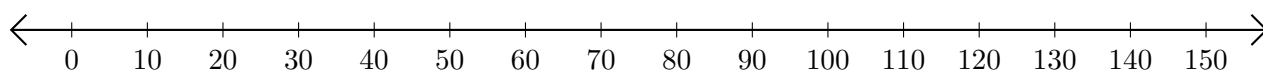
3.  $40 + 20 = \underline{\hspace{2cm}}$



4.  $90 - 70 = \underline{\hspace{2cm}}$



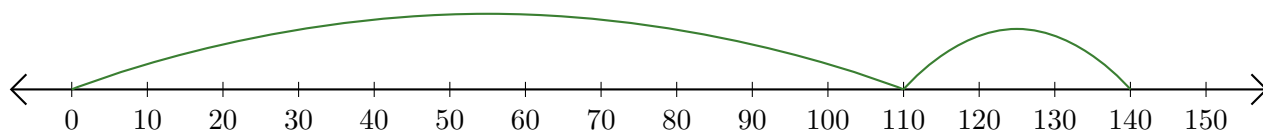
5.  $50 + 70 = \underline{\hspace{2cm}}$



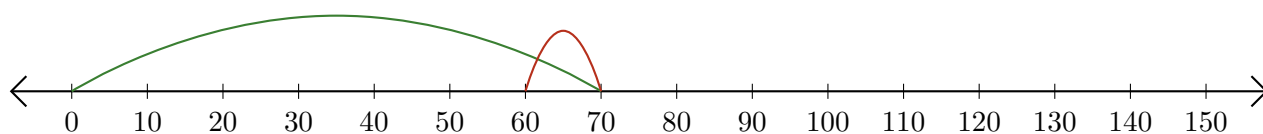
# Opérations sur Une Droite Graduée (F) Réponses

Utilisez la droite graduée pour calculer chaque somme ou différence.

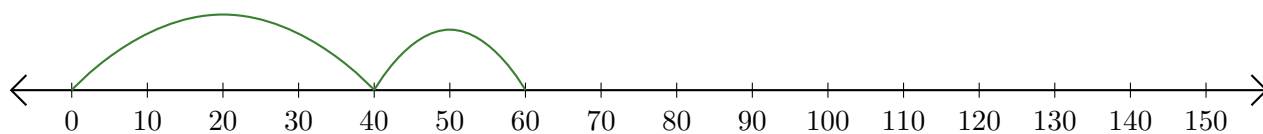
1.  $110 + 30 = \underline{140}$



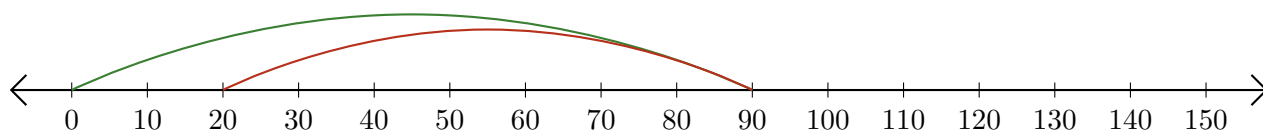
2.  $70 - 10 = \underline{60}$



3.  $40 + 20 = \underline{60}$



4.  $90 - 70 = \underline{20}$



5.  $50 + 70 = \underline{120}$

