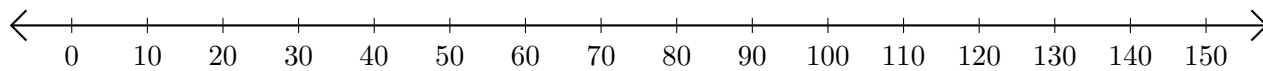


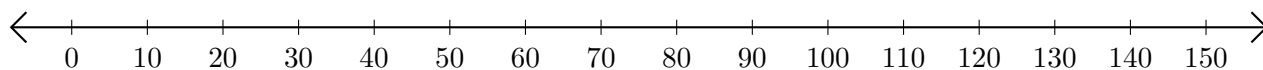
Opérations sur Une Droite Graduée (E)

Utilisez la droite graduée pour calculer chaque somme ou différence.

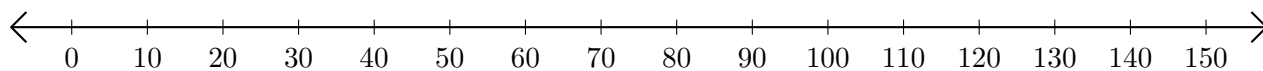
1. $10 + 100 = \underline{\hspace{2cm}}$



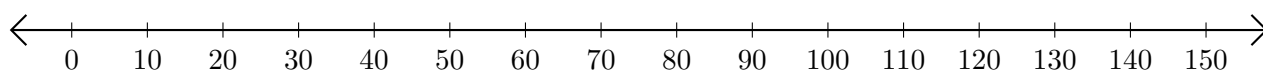
2. $90 - 60 = \underline{\hspace{2cm}}$



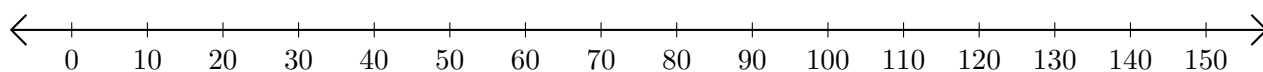
3. $30 + 110 = \underline{\hspace{2cm}}$



4. $150 - 110 = \underline{\hspace{2cm}}$



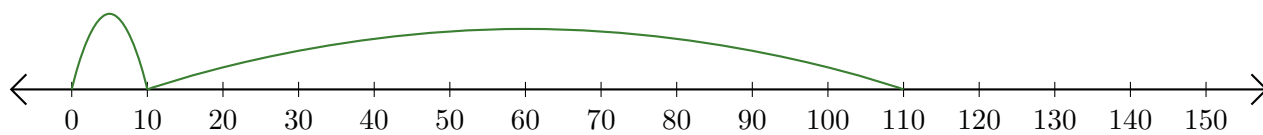
5. $40 + 50 = \underline{\hspace{2cm}}$



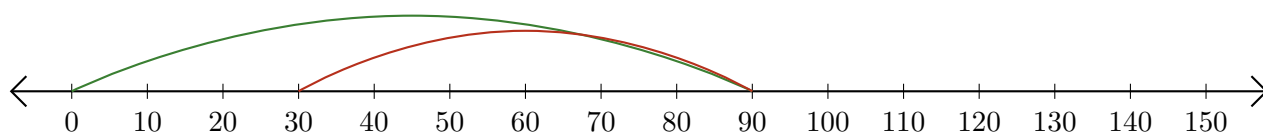
Opérations sur Une Droite Graduée (E) Réponses

Utilisez la droite graduée pour calculer chaque somme ou différence.

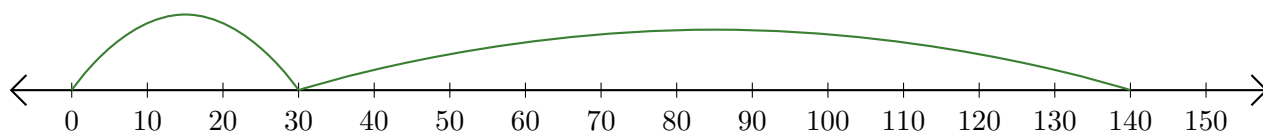
1. $10 + 100 = \underline{110}$



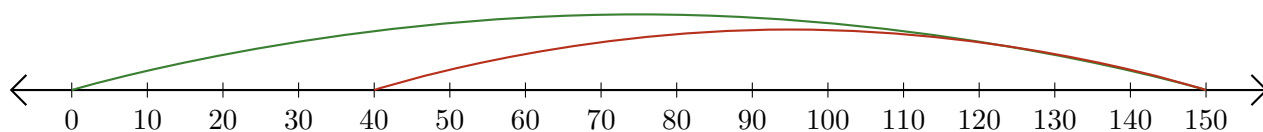
2. $90 - 60 = \underline{30}$



3. $30 + 110 = \underline{140}$



4. $150 - 110 = \underline{40}$



5. $40 + 50 = \underline{90}$

