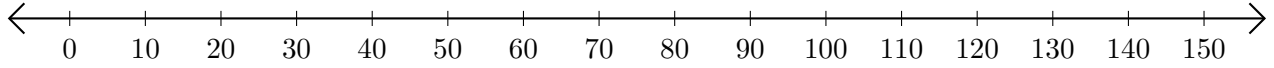


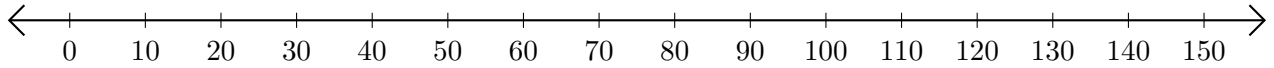
# Opérations sur Une Droite Graduée (D)

Utilisez la droite graduée pour calculer chaque somme ou différence.

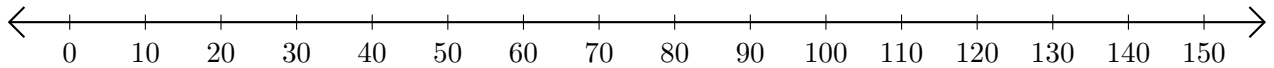
1.  $10 + 100 = \underline{\hspace{2cm}}$



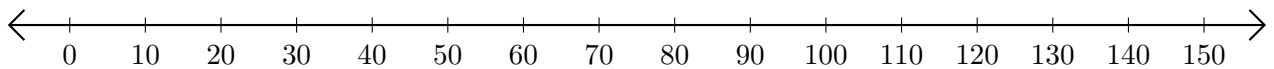
2.  $140 - 120 = \underline{\hspace{2cm}}$



3.  $40 + 30 = \underline{\hspace{2cm}}$



4.  $150 - 110 = \underline{\hspace{2cm}}$



5.  $90 + 20 = \underline{\hspace{2cm}}$

