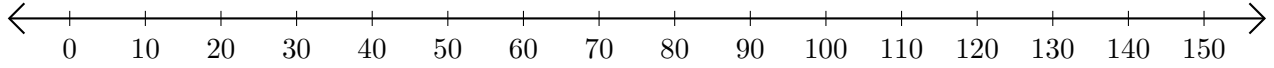


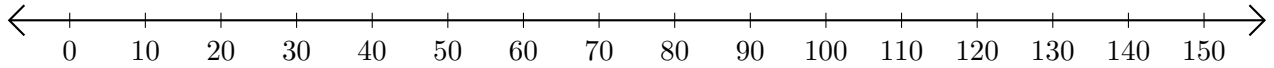
Opérations sur Une Droite Graduée (A)

Utilisez la droite graduée pour calculer chaque somme ou différence.

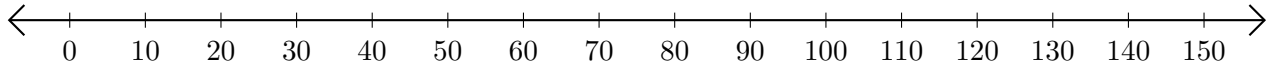
1. $130 + 20 = \underline{\hspace{2cm}}$



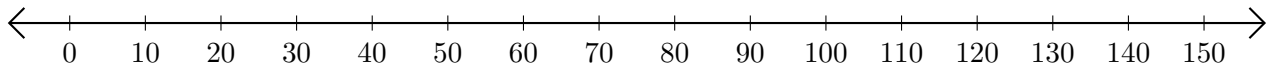
2. $90 - 60 = \underline{\hspace{2cm}}$



3. $40 + 90 = \underline{\hspace{2cm}}$



4. $100 - 50 = \underline{\hspace{2cm}}$



5. $110 + 30 = \underline{\hspace{2cm}}$

