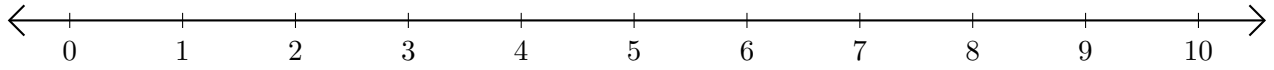


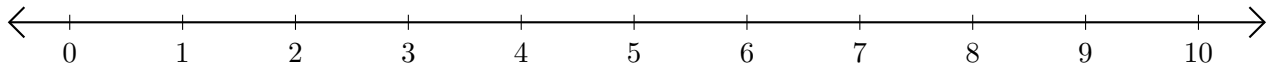
Opérations sur Une Droite Graduée (A)

Utilisez la droite graduée pour calculer chaque somme ou différence.

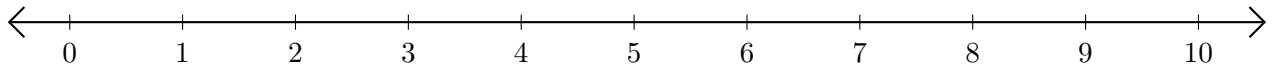
1. $5 + 1 = \underline{\quad}$



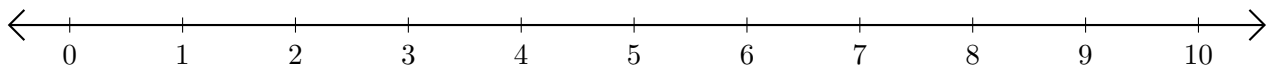
2. $9 - 8 = \underline{\quad}$



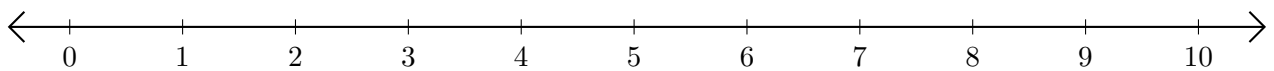
3. $6 + 2 = \underline{\quad}$



4. $9 - 3 = \underline{\quad}$



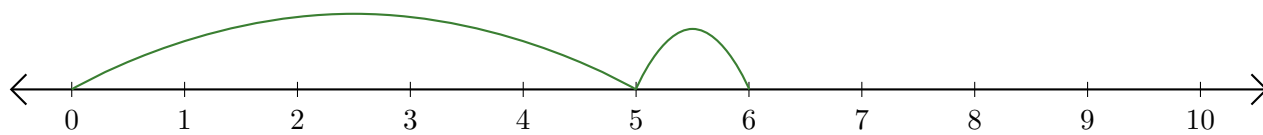
5. $9 - 2 = \underline{\quad}$



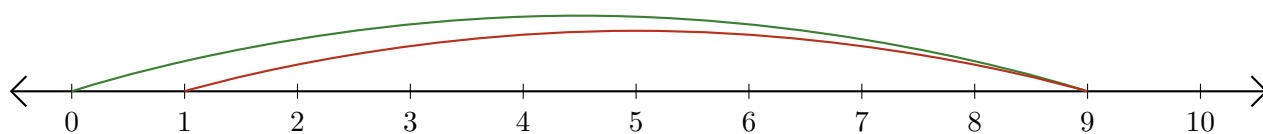
Opérations sur Une Droite Graduée (A) Réponses

Utilisez la droite graduée pour calculer chaque somme ou différence.

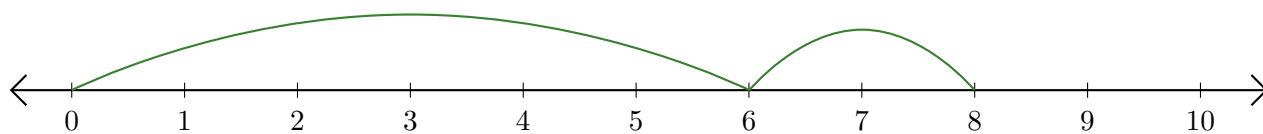
1. $5 + 1 = \underline{6}$



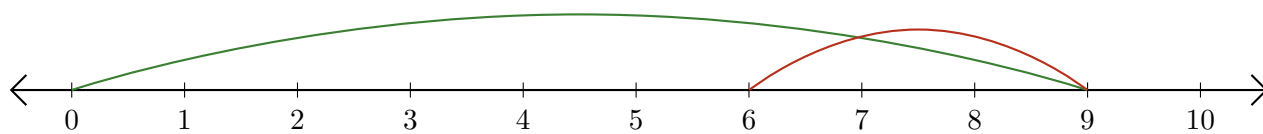
2. $9 - 8 = \underline{1}$



3. $6 + 2 = \underline{8}$



4. $9 - 3 = \underline{6}$



5. $9 - 2 = \underline{7}$

