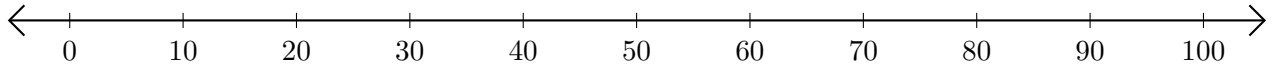


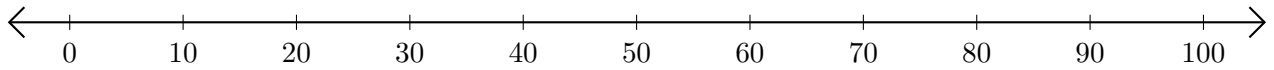
# Opérations sur Une Droite Graduée (I)

Utilisez la droite graduée pour calculer chaque somme ou différence.

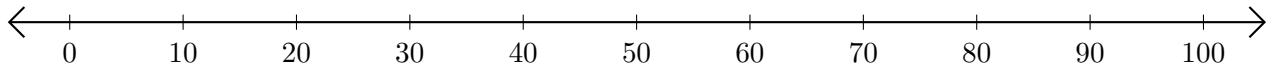
1.  $50 + 50 = \underline{\hspace{2cm}}$



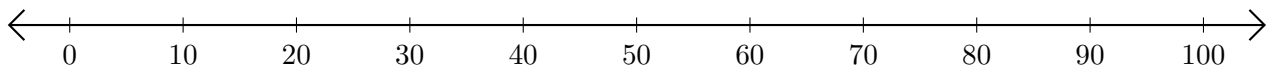
2.  $70 - 60 = \underline{\hspace{2cm}}$



3.  $40 + 60 = \underline{\hspace{2cm}}$



4.  $90 - 80 = \underline{\hspace{2cm}}$



5.  $90 + 10 = \underline{\hspace{2cm}}$

