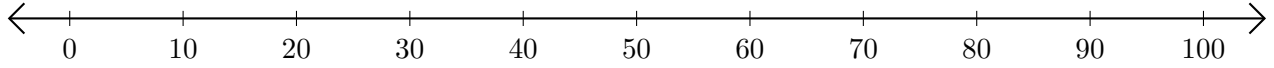


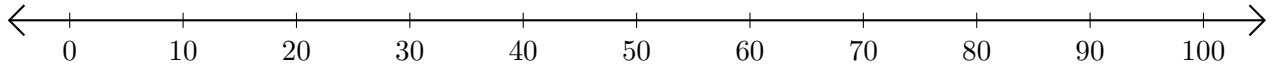
# Opérations sur Une Droite Graduée (H)

Utilisez la droite graduée pour calculer chaque somme ou différence.

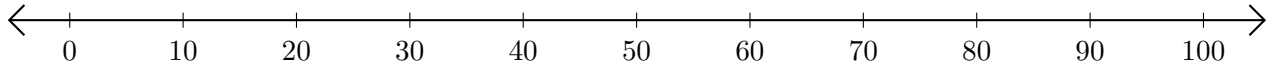
1.  $60 + 10 = \underline{\quad}$



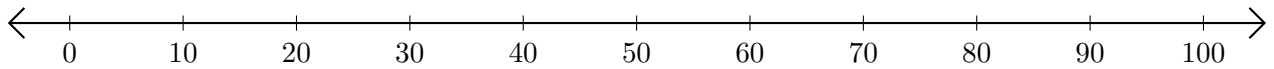
2.  $50 - 30 = \underline{\quad}$



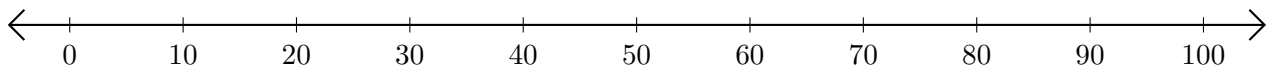
3.  $50 + 50 = \underline{\quad}$



4.  $60 - 10 = \underline{\quad}$



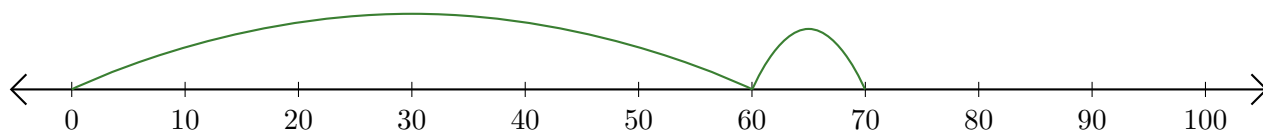
5.  $80 - 70 = \underline{\quad}$



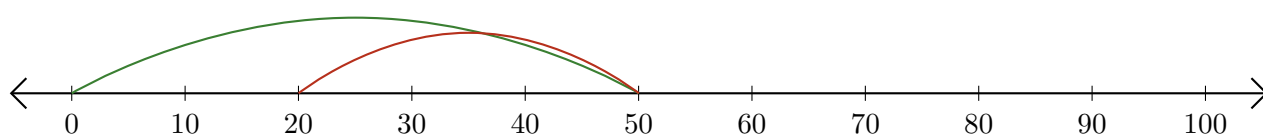
# Opérations sur Une Droite Graduée (H) Réponses

Utilisez la droite graduée pour calculer chaque somme ou différence.

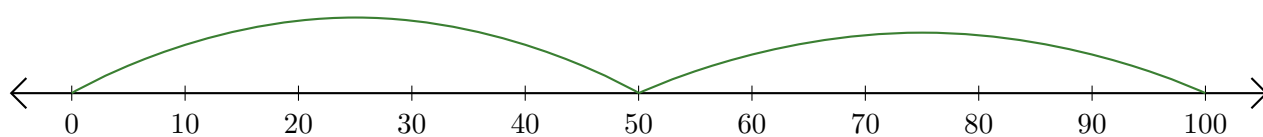
1.  $60 + 10 = \underline{70}$



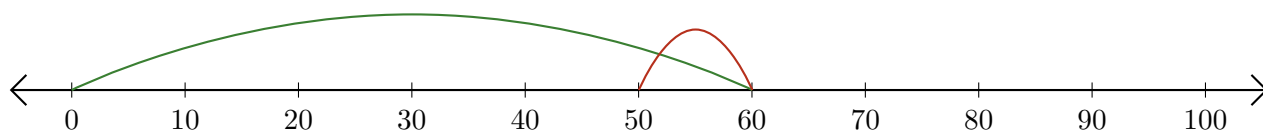
2.  $50 - 30 = \underline{20}$



3.  $50 + 50 = \underline{100}$



4.  $60 - 10 = \underline{50}$



5.  $80 - 70 = \underline{10}$

