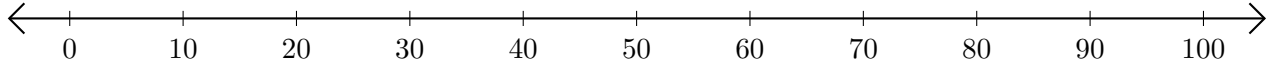


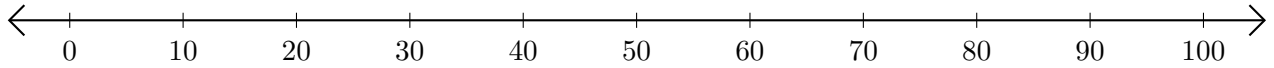
# Opérations sur Une Droite Graduée (D)

Utilisez la droite graduée pour calculer chaque somme ou différence.

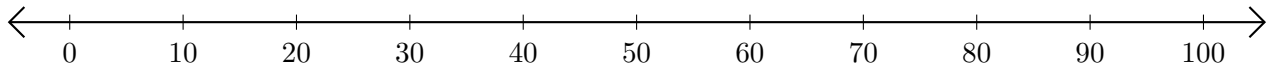
1.  $80 + 10 = \underline{\quad}$



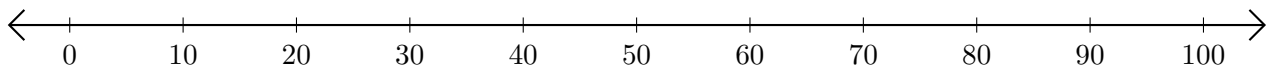
2.  $90 - 50 = \underline{\quad}$



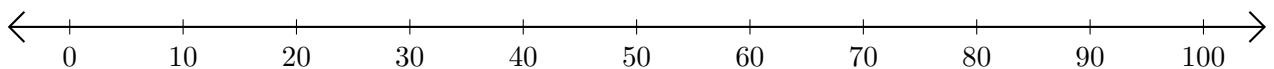
3.  $10 + 30 = \underline{\quad}$



4.  $90 - 20 = \underline{\quad}$



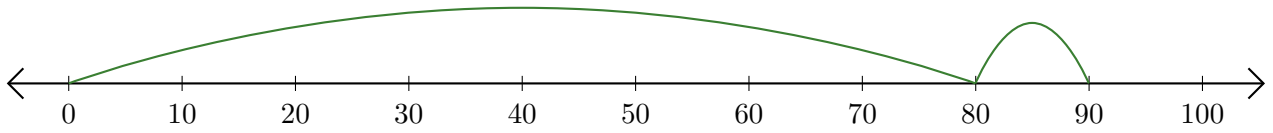
5.  $70 - 60 = \underline{\quad}$



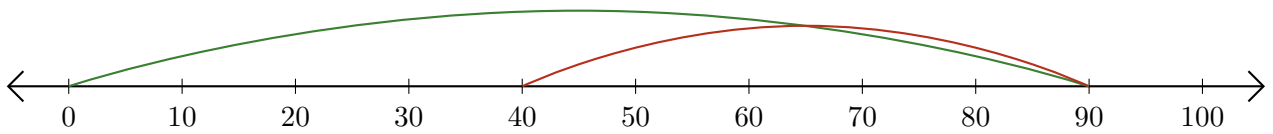
# Opérations sur Une Droite Graduée (D) Réponses

Utilisez la droite graduée pour calculer chaque somme ou différence.

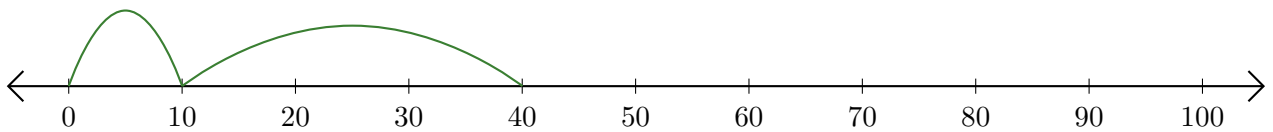
1.  $80 + 10 = \underline{90}$



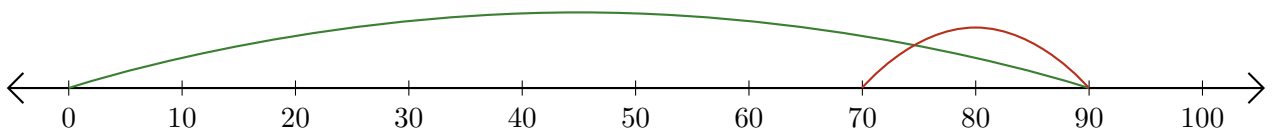
2.  $90 - 50 = \underline{40}$



3.  $10 + 30 = \underline{40}$



4.  $90 - 20 = \underline{70}$



5.  $70 - 60 = \underline{10}$

