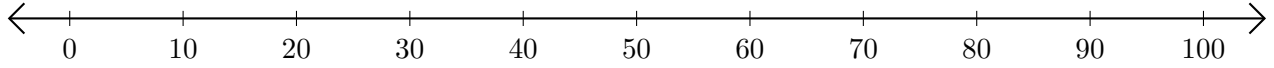


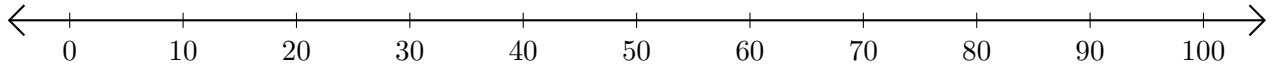
# Opérations sur Une Droite Graduée (C)

Utilisez la droite graduée pour calculer chaque somme ou différence.

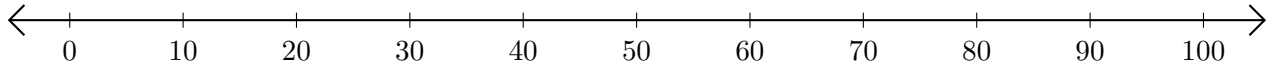
1.  $60 + 30 = \underline{\quad}$



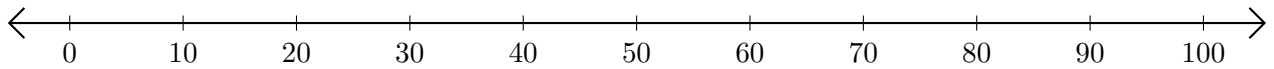
2.  $60 - 30 = \underline{\quad}$



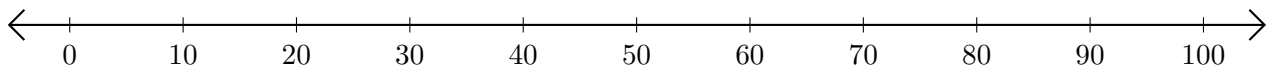
3.  $80 + 20 = \underline{\quad}$



4.  $60 - 50 = \underline{\quad}$



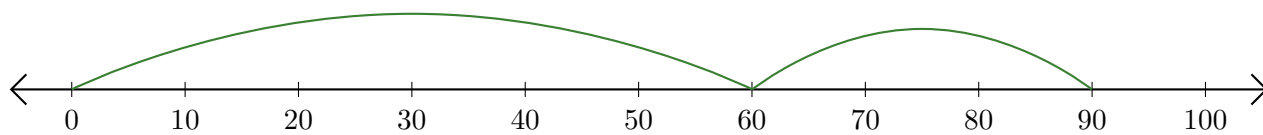
5.  $80 - 40 = \underline{\quad}$



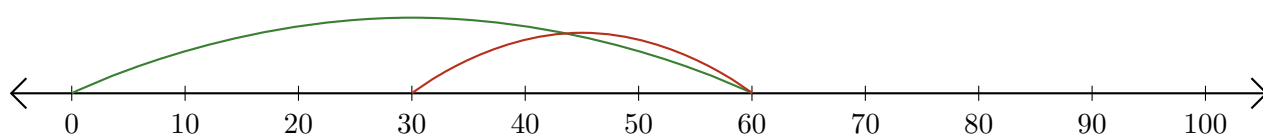
# Opérations sur Une Droite Graduée (C) Réponses

Utilisez la droite graduée pour calculer chaque somme ou différence.

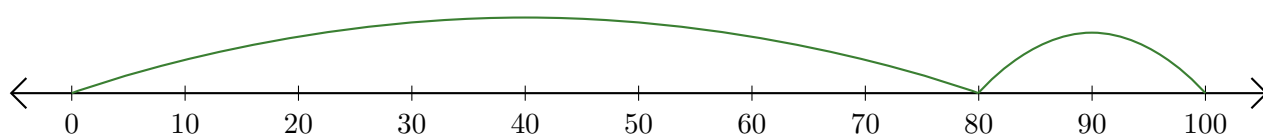
1.  $60 + 30 = \underline{90}$



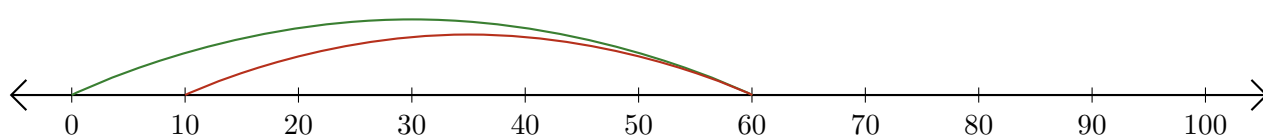
2.  $60 - 30 = \underline{30}$



3.  $80 + 20 = \underline{100}$



4.  $60 - 50 = \underline{10}$



5.  $80 - 40 = \underline{40}$

