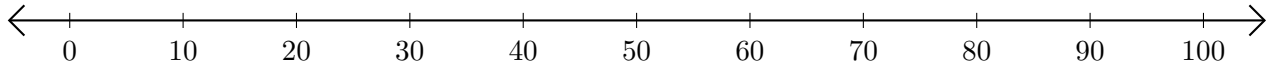


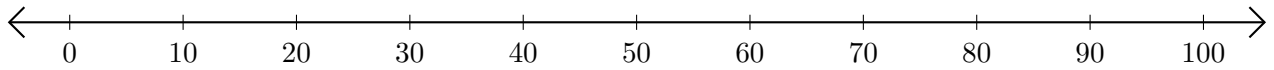
Opérations sur Une Droite Graduée (A)

Utilisez la droite graduée pour calculer chaque somme ou différence.

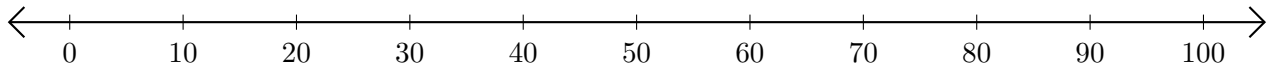
1. $50 + 30 = \underline{\quad}$



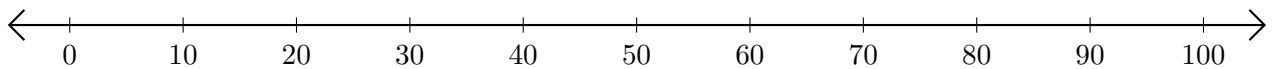
2. $80 - 40 = \underline{\quad}$



3. $80 + 20 = \underline{\quad}$



4. $100 - 90 = \underline{\quad}$



5. $20 + 10 = \underline{\quad}$

